


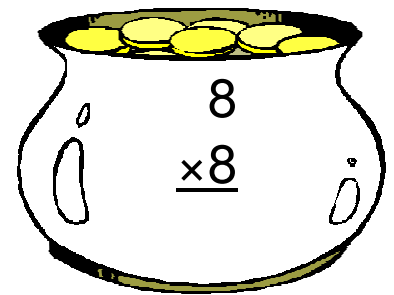



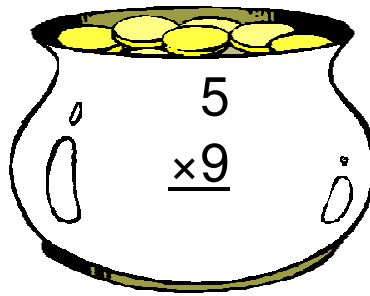






Pot of Gold Multiplication (H)

Instructions: Can you find Lucky's real pot of gold? Maybe he has more than one hidden. Circle all of the pots with a product of 20.



Pot of Gold Multiplication (H) Answers

Instructions: Can you find Lucky's real pot of gold? Maybe he has more than one hidden. Circle all of the pots with a product of 20.

$$\begin{array}{r} 6 \\ \times 9 \\ \hline 54 \end{array}$$

$$\begin{array}{r} 6 \\ \times 3 \\ \hline 18 \end{array}$$

$$\begin{array}{r} 9 \\ \times 5 \\ \hline 45 \end{array}$$

$$\begin{array}{r} 7 \\ \times 7 \\ \hline 49 \end{array}$$

$$\begin{array}{r} 5 \\ \times 9 \\ \hline 45 \end{array}$$

$$\begin{array}{r} 6 \\ \times 3 \\ \hline 18 \end{array}$$

$$\begin{array}{r} 3 \\ \times 4 \\ \hline 12 \end{array}$$

$$\begin{array}{r} 7 \\ \times 8 \\ \hline 56 \end{array}$$

$$\begin{array}{r} 8 \\ \times 8 \\ \hline 64 \end{array}$$

$$\begin{array}{r} 7 \\ \times 4 \\ \hline 28 \end{array}$$

$$\begin{array}{r} 5 \\ \times 4 \\ \hline 20 \end{array}$$

$$\begin{array}{r} 7 \\ \times 5 \\ \hline 35 \end{array}$$

Lucky's Pot