

# Valentine's Day Missing Digits (D)

Instructions: The students in Mrs. Love's class had sticky fingers from their Valentine's Day candy, and they smudged some of the numbers on Mrs. Love's answer sheet. Fill in the missing digits to help.

$$\begin{array}{r} 67 \\ + \square 9 \\ \hline 10\square \end{array}$$



$$\begin{array}{r} 9 \\ \times 3 \\ \hline 2\square \end{array}$$

$$\begin{array}{r} 7 \\ \times \square \\ \hline 63 \end{array}$$

$$\begin{array}{r} \square \\ \times 5 \\ \hline 10 \end{array}$$

$$\begin{array}{r} 6\square \\ - 39 \\ \hline \square 7 \end{array}$$

$$\begin{array}{r} 8\square \\ - 52 \\ \hline \square 8 \end{array}$$



$$\begin{array}{r} \square 7 \\ + 3\square \\ \hline 136 \end{array}$$


$$\begin{array}{r} \square 0 \\ - 43 \\ \hline 1\square \end{array}$$

$$\begin{array}{r} \square \\ \times 5 \\ \hline 25 \end{array}$$


$$\begin{array}{r} 9\square \\ + 42 \\ \hline 1\square 3 \end{array}$$

$$\begin{array}{r} 13\square \\ - \square 6 \\ \hline 49 \end{array}$$

$$\begin{array}{r} 73 \\ + \square 2 \\ \hline 11\square \end{array}$$



$$\begin{array}{r} 1\square 9 \\ - 97 \\ \hline 1\square \end{array}$$



$$\begin{array}{r} \square 8 \\ \times \square \\ \hline 56 \end{array}$$

$$\begin{array}{r} \square 8 \\ + \square 9 \\ \hline 176 \end{array}$$


$$\begin{array}{r} \square 6 \\ \times \square \\ \hline 6 \end{array}$$

$$\begin{array}{r} \square 1 \\ \times 7 \\ \hline \square \end{array}$$

$$\begin{array}{r} 8\square \\ + 37 \\ \hline 1\square 3 \end{array}$$


$$\begin{array}{r} \square 8 \\ \times 2 \\ \hline 1\square \end{array}$$

$$\begin{array}{r} \square 7 \\ + 4\square \\ \hline 103 \end{array}$$



$$\begin{array}{r} \square \\ \times 7 \\ \hline 49 \end{array}$$

$$\begin{array}{r} \square 5 \\ - 18 \\ \hline 4\square \end{array}$$



# Valentine's Day Missing Digits (D) Answers

Instructions: The students in Mrs. Love's class had sticky fingers from their Valentine's Day candy, and they smudged some of the numbers on Mrs. Love's answer sheet. Fill in the missing digits to help.

$$\begin{array}{r} 67 \\ + 39 \\ \hline 106 \end{array}$$



$$\begin{array}{r} 9 \\ \times 3 \\ \hline 27 \end{array}$$

$$\begin{array}{r} 7 \\ \times 9 \\ \hline 63 \end{array}$$

$$\begin{array}{r} 2 \\ \times 5 \\ \hline 10 \end{array}$$

$$\begin{array}{r} 66 \\ - 39 \\ \hline 27 \end{array}$$

$$\begin{array}{r} 80 \\ - 52 \\ \hline 28 \end{array}$$



$$\begin{array}{r} 97 \\ + 39 \\ \hline 136 \end{array}$$

$$\begin{array}{r} 60 \\ - 43 \\ \hline 17 \end{array}$$

$$\begin{array}{r} 5 \\ \times 5 \\ \hline 25 \end{array}$$


$$\begin{array}{r} 91 \\ + 42 \\ \hline 133 \end{array}$$

$$\begin{array}{r} 135 \\ - 86 \\ \hline 49 \end{array}$$

$$\begin{array}{r} 73 \\ + 42 \\ \hline 115 \end{array}$$



$$\begin{array}{r} 109 \\ - 97 \\ \hline 12 \end{array}$$



$$\begin{array}{r} 8 \\ \times 7 \\ \hline 56 \end{array}$$

$$\begin{array}{r} 87 \\ + 89 \\ \hline 176 \end{array}$$


$$\begin{array}{r} 6 \\ \times 1 \\ \hline 6 \end{array}$$

$$\begin{array}{r} 1 \\ \times 7 \\ \hline 7 \end{array}$$

$$\begin{array}{r} 86 \\ + 37 \\ \hline 123 \end{array}$$

$$\begin{array}{r} 8 \\ \times 2 \\ \hline 16 \end{array}$$

$$\begin{array}{r} 57 \\ + 46 \\ \hline 103 \end{array}$$



$$\begin{array}{r} 7 \\ \times 7 \\ \hline 49 \end{array}$$

$$\begin{array}{r} 65 \\ - 18 \\ \hline 47 \end{array}$$

