
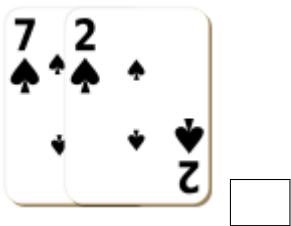
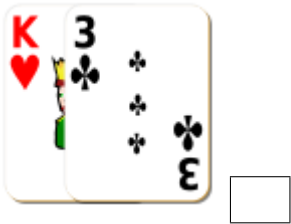
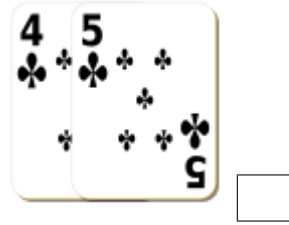


Adding Playing Cards (A)

Find the sum of each set of cards.



Adding Playing Cards (A) Answers

Find the sum of each set of cards.



3



9



16



7



9



14



17



17



12



12



14



12