

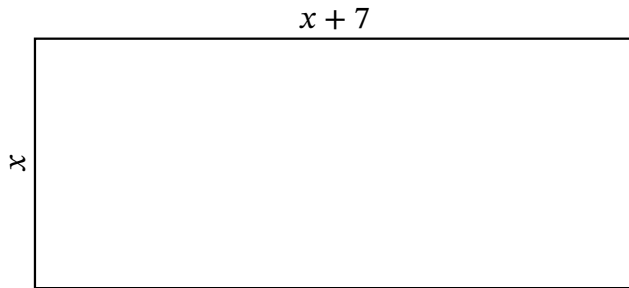
# Algebra Rectangles (A)

Name: \_\_\_\_\_

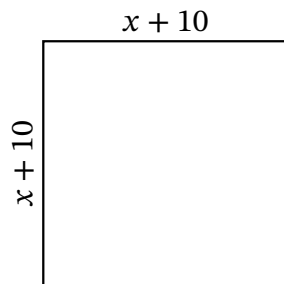
Date: \_\_\_\_\_

Score: \_\_\_\_\_

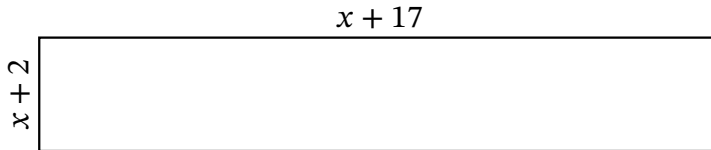
Determine the Value of  $x$ , Length, Width and Area for each rectangle.



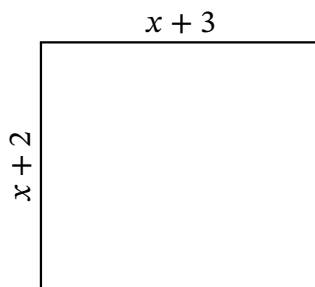
Perimeter: km  
Value of  $x$ : km  
Length: km  
Width: km  
Area:  $\text{km}^2$



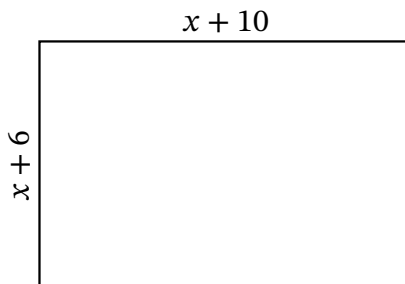
Perimeter: ft  
Value of  $x$ : ft  
Length: ft  
Width: ft  
Area:  $\text{ft}^2$



Perimeter: m  
Value of  $x$ : m  
Length: m  
Width: m  
Area:  $\text{m}^2$



Perimeter: mm  
Value of  $x$ : mm  
Length: mm  
Width: mm  
Area:  $\text{mm}^2$



Perimeter: cm  
Value of  $x$ : cm  
Length: cm  
Width: cm  
Area:  $\text{cm}^2$