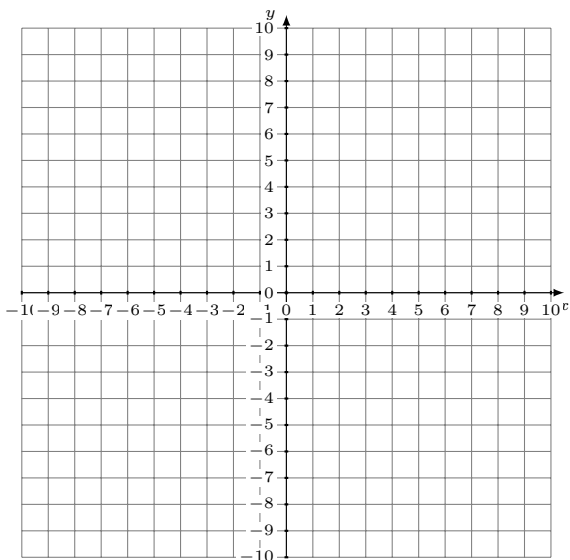


Graphing Linear Systems (I)

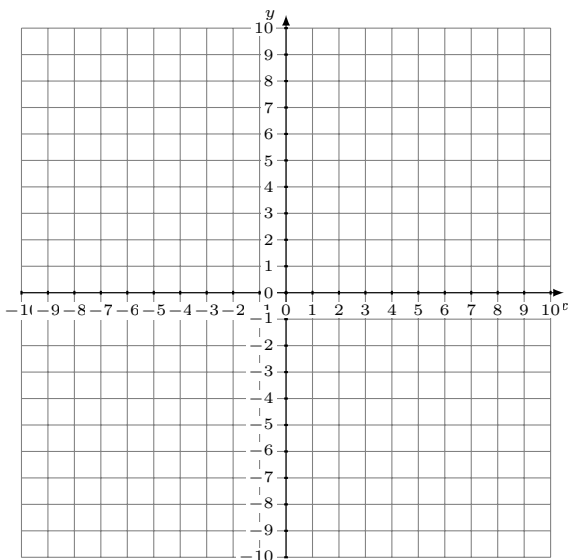
Graph each system and identify its solution.

1. $y = -\frac{3}{2}x - 8$
 $y = -\frac{13}{8}x - 9$



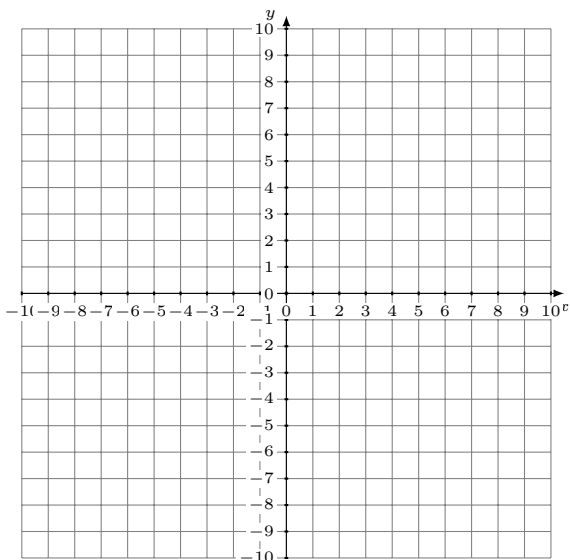
Solution: (----,----)

2. $y = \frac{1}{2}x + 2$
 $y = \frac{1}{8}x + 5$



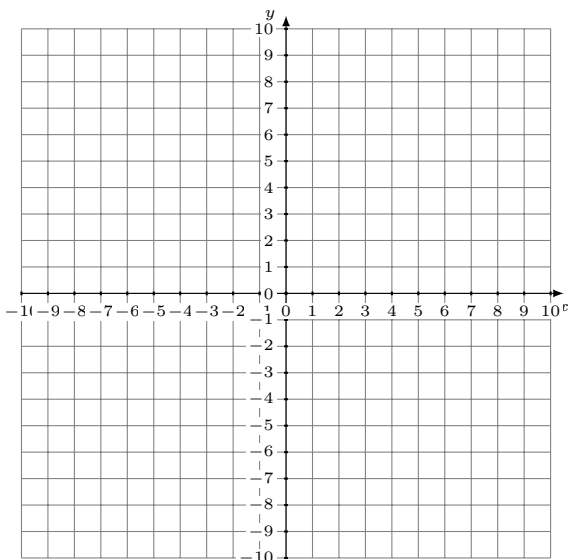
Solution: (----,----)

3. $y = -\frac{12}{5}x - 6$
 $y = -\frac{7}{5}x - 1$



Solution: (----,----)

4. $y = -\frac{13}{3}x + 4$
 $y = -\frac{4}{3}x - 5$



Solution: (----,----)