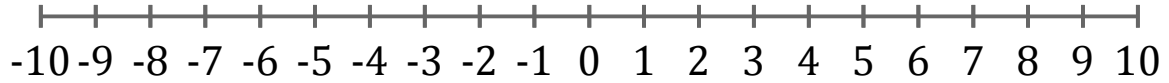


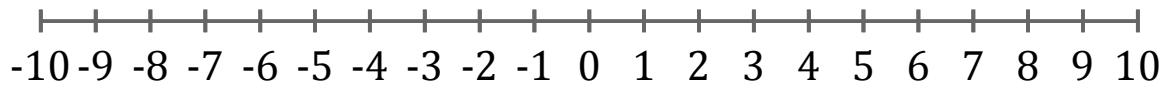
Graphing Inequalities (D)

Graph each inequality on a number line.

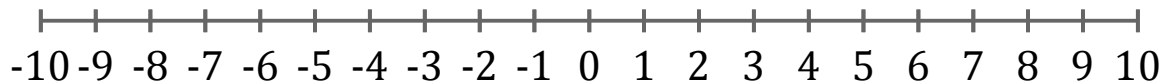
1. $x < 3$



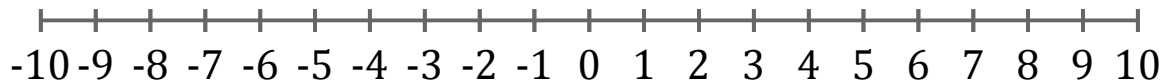
2. $x \leq -5$



3. $x \leq -7$



4. $x > 8$



5. $x > -9$

