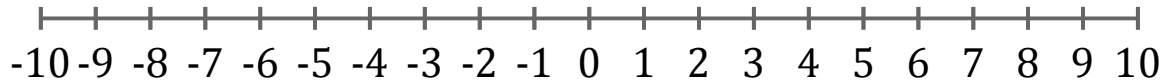


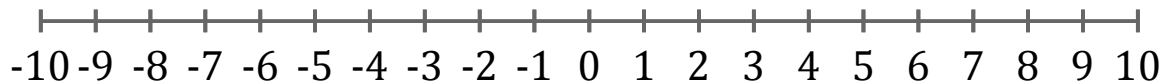
Graphing Inequalities (E)

Graph each inequality on a number line.

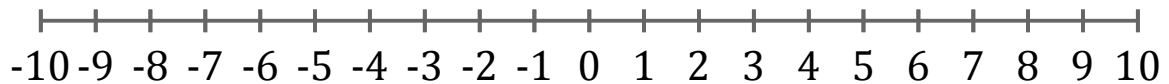
1. $x \leq 9$



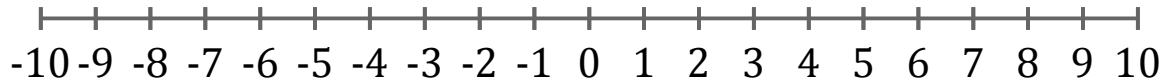
2. $x \geq 9$



3. $x < 9$



4. $x \leq -2$



5. $x < -7$

