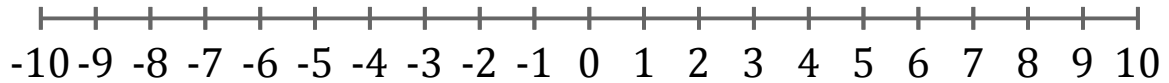


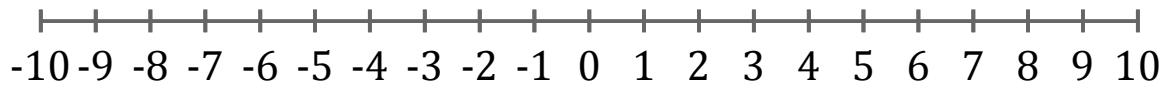
# Graphing Inequalities (F)

Graph each inequality on a number line.

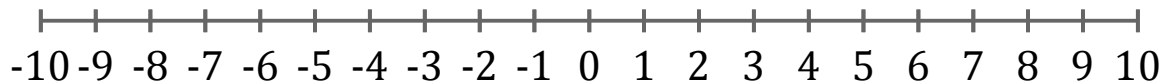
1.  $x > 0$



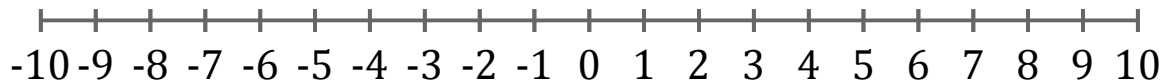
2.  $x \geq 8$



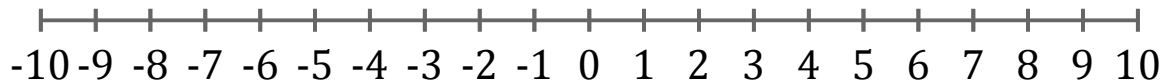
3.  $x \geq 6$



4.  $x < -2$



5.  $x \geq 4$



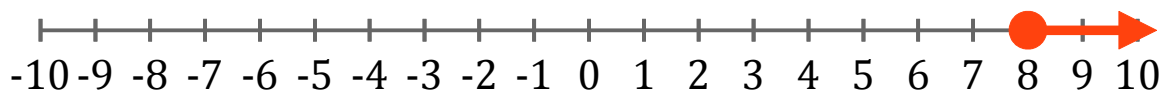
# Graphing Inequalities (F) Answers

Graph each inequality on a number line.

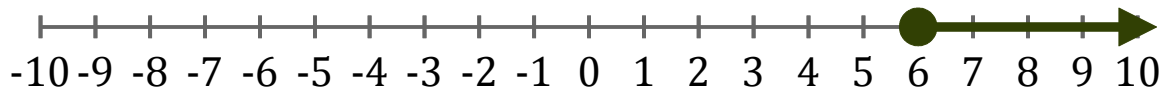
1.  $x > 0$



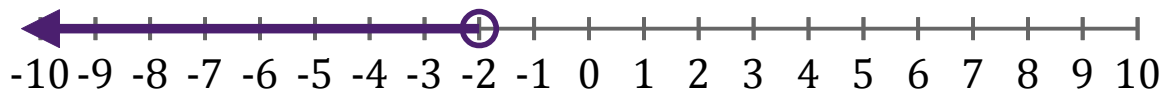
2.  $x \geq 8$



3.  $x \geq 6$



4.  $x < -2$



5.  $x \geq 4$

