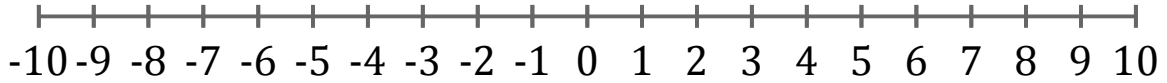


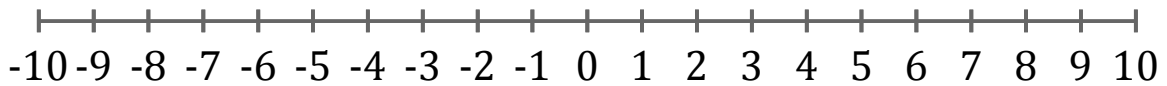
Graphing Inequalities (F)

Graph each inequality on a number line.

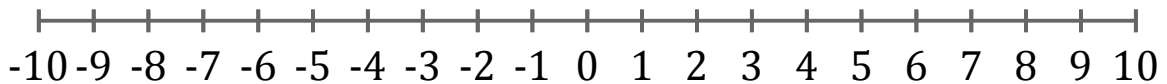
1. $x > 0$



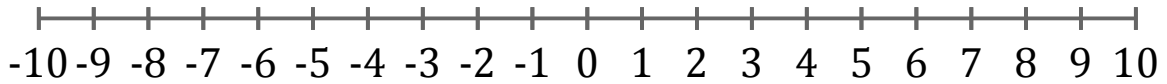
2. $x \geq 8$



3. $x \geq 6$



4. $x < -2$



5. $x \geq 4$

