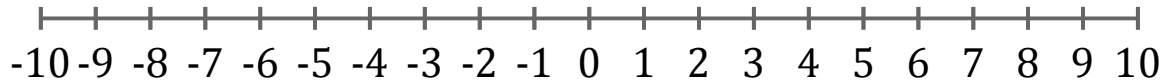


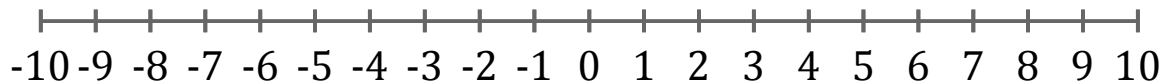
Graphing Inequalities (G)

Graph each inequality on a number line.

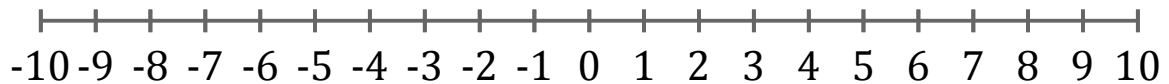
1. $x \geq -7$



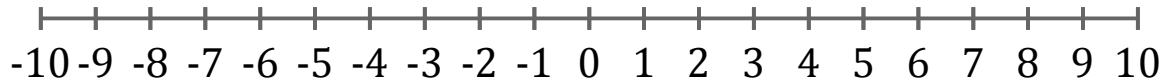
2. $x < -5$



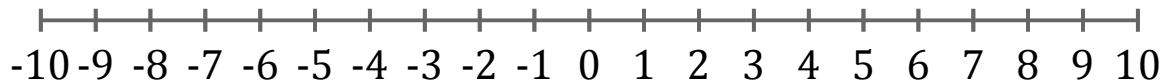
3. $x > 3$



4. $x \leq -2$



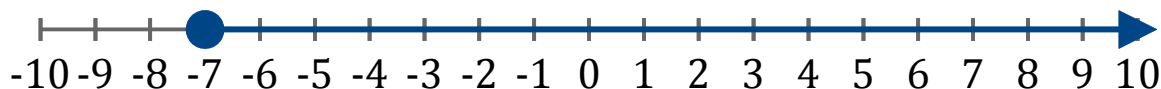
5. $x < 1$



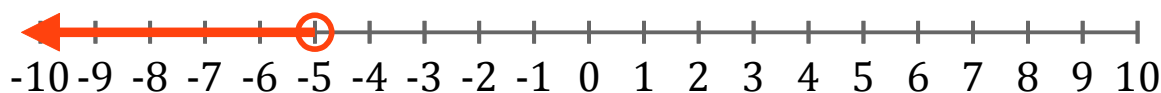
Graphing Inequalities (G) Answers

Graph each inequality on a number line.

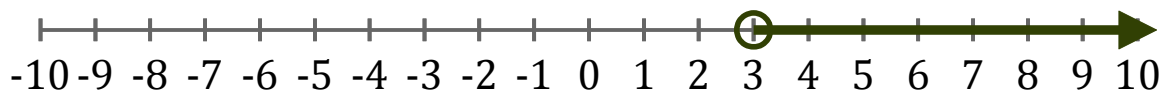
1. $x \geq -7$



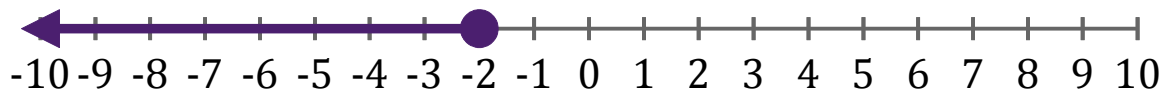
2. $x < -5$



3. $x > 3$



4. $x \leq -2$



5. $x < 1$

