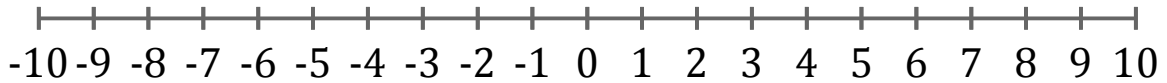


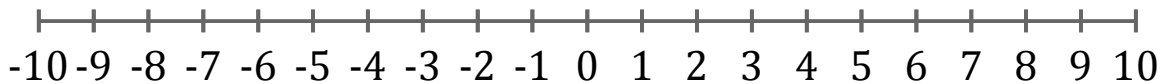
Graphing Inequalities (I)

Graph each inequality on a number line.

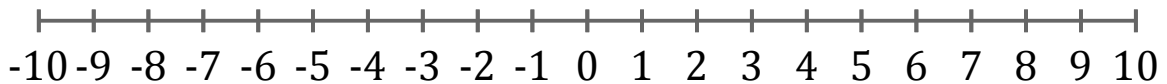
1. $x > 9$



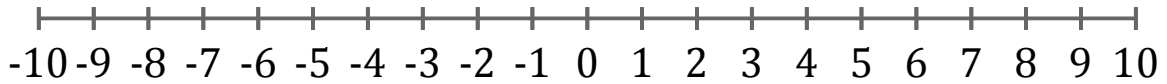
2. $x \geq -9$



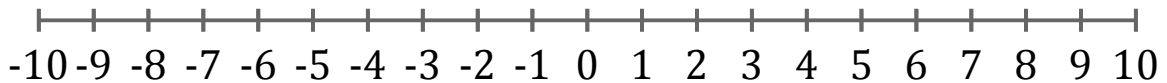
3. $x < 0$



4. $x \leq -3$



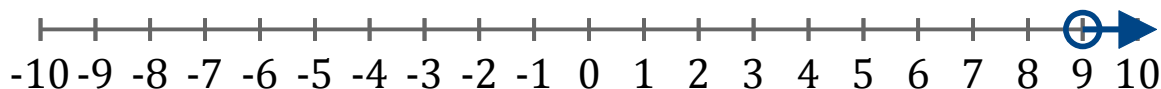
5. $x \geq 8$



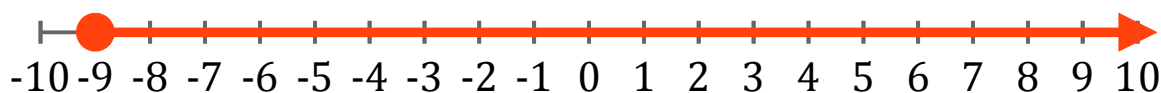
Graphing Inequalities (I) Answers

Graph each inequality on a number line.

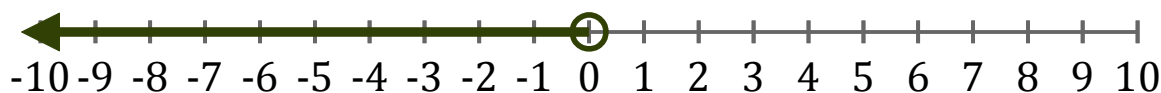
1. $x > 9$



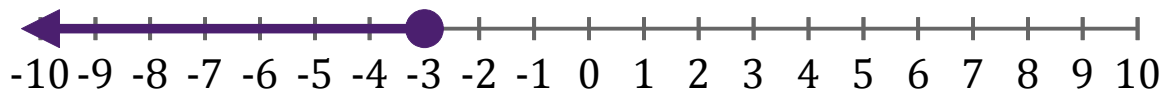
2. $x \geq -9$



3. $x < 0$



4. $x \leq -3$



5. $x \geq 8$

