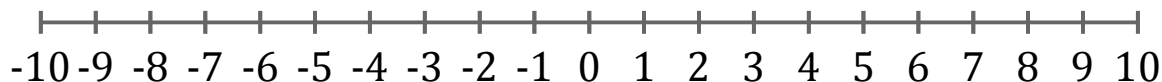


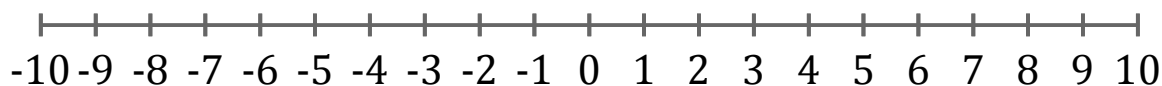
Graphing Inequalities (J)

Graph each inequality on a number line.

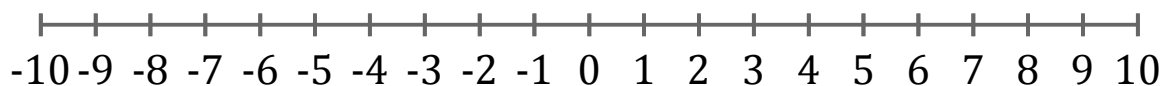
1. $x < -6$



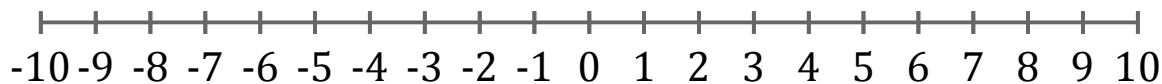
2. $x > -8$



3. $x < 5$



4. $x \leq 6$



5. $x \geq -5$

