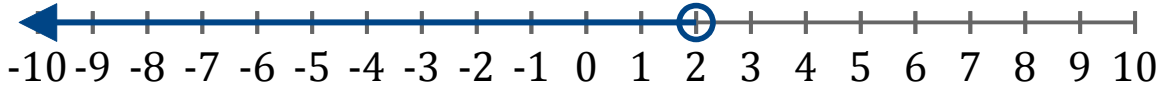


# Inequality Graphs (B)

Write the inequality for each graph.

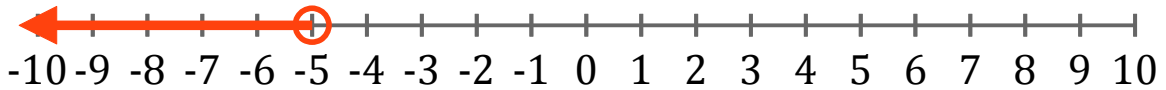
1.

\_\_\_\_\_



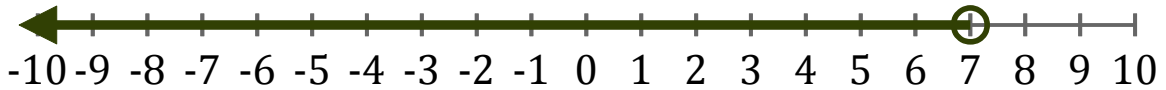
2.

\_\_\_\_\_



3.

\_\_\_\_\_



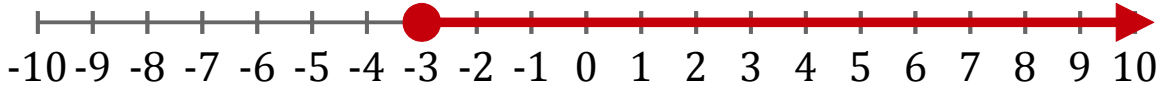
4.

\_\_\_\_\_



5.

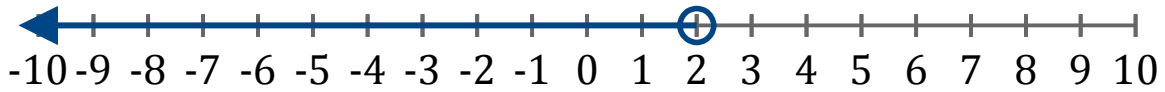
\_\_\_\_\_



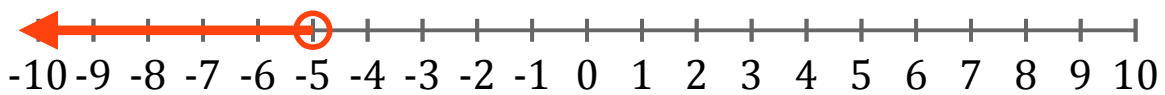
# Inequality Graphs (B) Answers

Write the inequality for each graph.

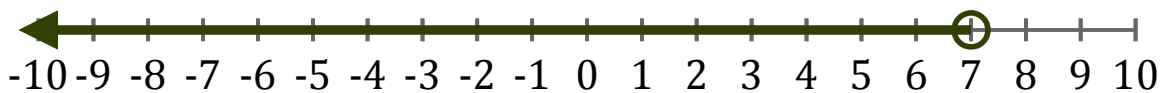
1.  $x < 2$



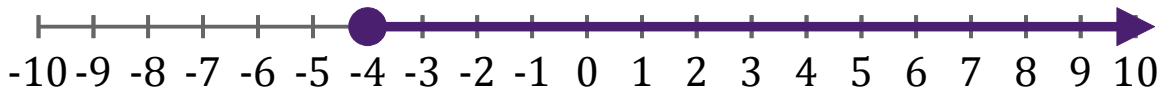
2.  $x < -5$



3.  $x < 7$



4.  $x \geq -4$



5.  $x \geq -3$

