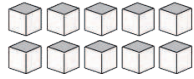



Base Ten Blocks—Counting Units (A)

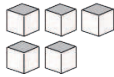
Instructions: Count how many units are in each group below.



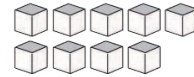
There are ____ units
in this group.



There are ____ units
in this group.



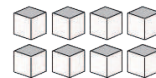
There are ____ units
in this group.



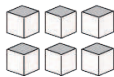
There are ____ units
in this group.



There are ____ units
in this group.



There are ____ units
in this group.



There are ____ units
in this group.



There are ____ units
in this group.