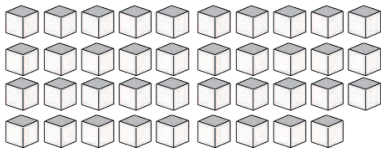
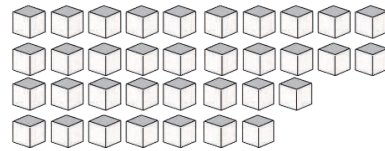


# Base Ten Blocks—Counting Units (E)

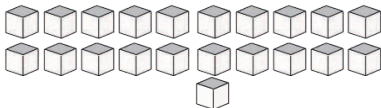
**Instructions:** Count how many units are in each group below.



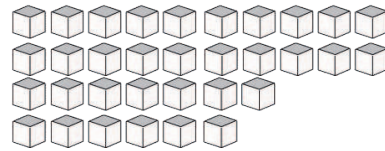
There are \_\_\_\_\_ units  
in this group.



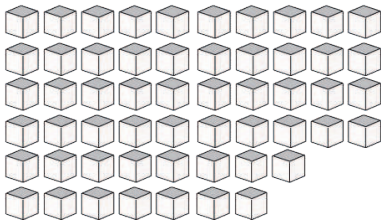
There are \_\_\_\_\_ units  
in this group.



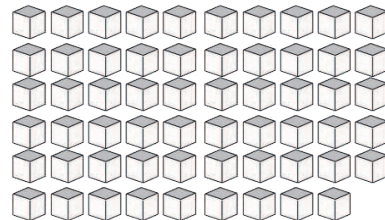
There are \_\_\_\_\_ units  
in this group.



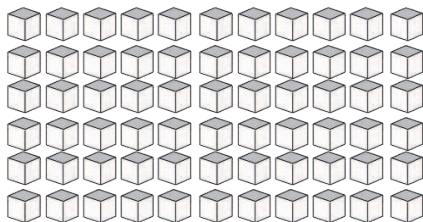
There are \_\_\_\_\_ units  
in this group.



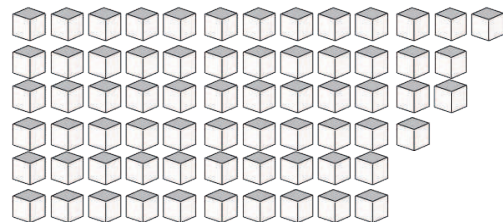
There are \_\_\_\_\_ units  
in this group.



There are \_\_\_\_\_ units  
in this group.



There are \_\_\_\_\_ units  
in this group.



There are \_\_\_\_\_ units  
in this group.