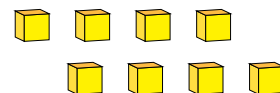
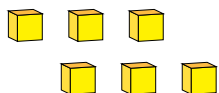
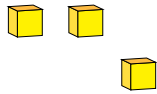
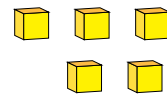
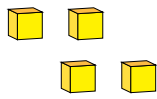


Representing Numbers (A)

What number is shown in each group of base ten blocks?



1

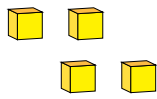


Representing Numbers (A) Answers

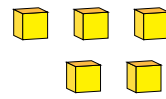
What number is shown in each group of base ten blocks?



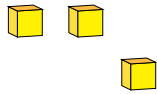
1



4



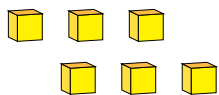
5



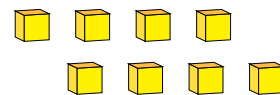
3



1



6



8