

Representing Numbers (D)

What number is shown in each group of base ten blocks?



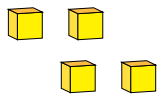
1

Representing Numbers (D) Answers

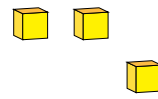
What number is shown in each group of base ten blocks?



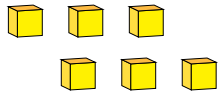
1



4



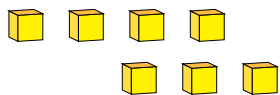
3



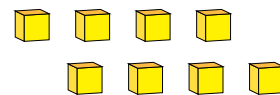
6



1



7



8