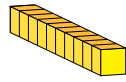


Representing Numbers (A)

What number is shown in each group of base ten blocks?



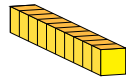
10



1

Representing Numbers (A) Answers

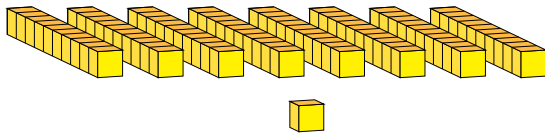
What number is shown in each group of base ten blocks?



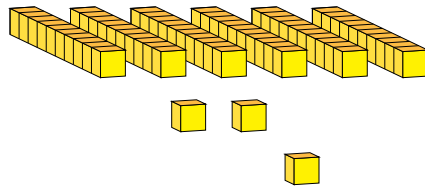
10



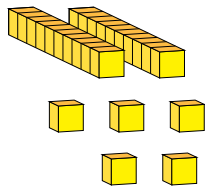
1



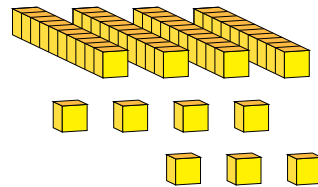
81




63



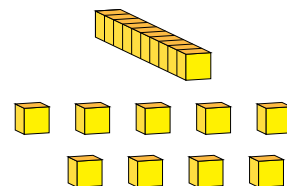
25



47



90



19