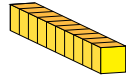


Representing Numbers (D)

What number is shown in each group of base ten blocks?



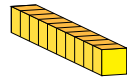
10



1

Representing Numbers (D) Answers

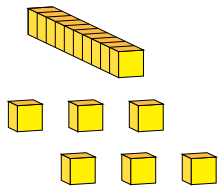
What number is shown in each group of base ten blocks?



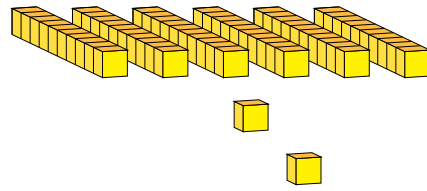
10



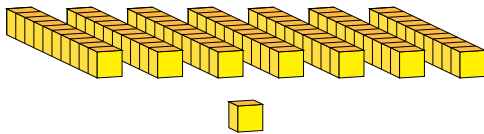
1



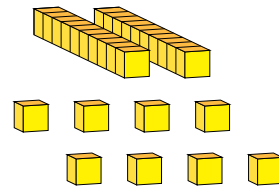
16




62




71



28



90



89