

# Representing Numbers (A)

What number is shown in each group of base ten blocks?



100



10



1

# Representing Numbers (A) Answers

What number is shown in each group of base ten blocks?



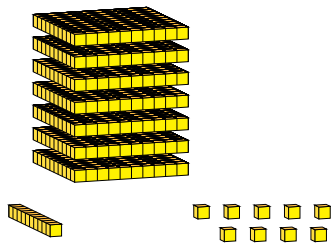
100



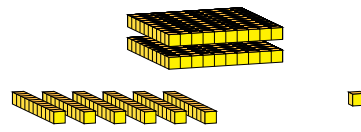
10



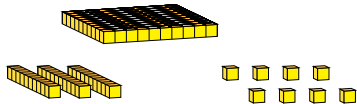
1



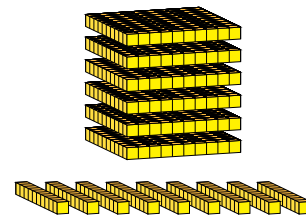
719



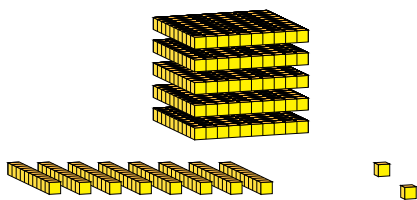
261



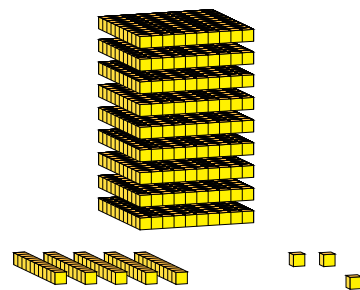
138



690



582



953