

Representing Numbers (B)

What number is shown in each group of base ten blocks?



100



10



1

Representing Numbers (B) Answers

What number is shown in each group of base ten blocks?



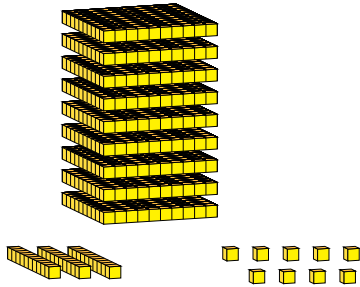
100



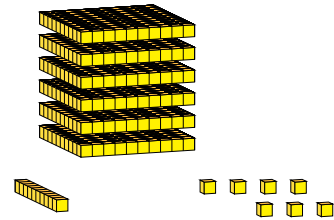
10



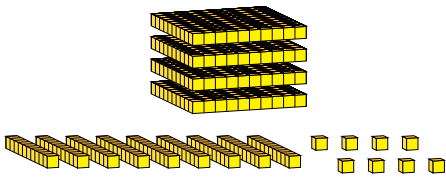
1



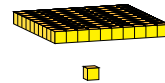
939



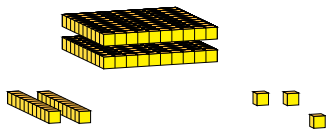
617



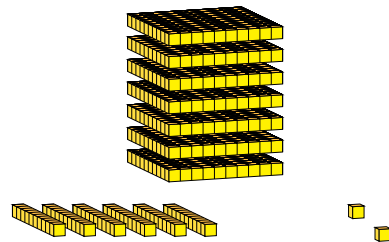
498



101



223



762