

# Representing Numbers (H)

What number is shown in each group of base ten blocks?



100



10



1

# Representing Numbers (H) Answers

What number is shown in each group of base ten blocks?



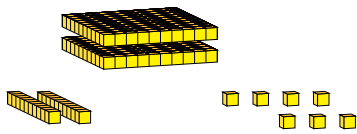
100



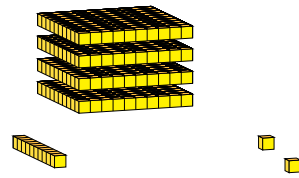
10



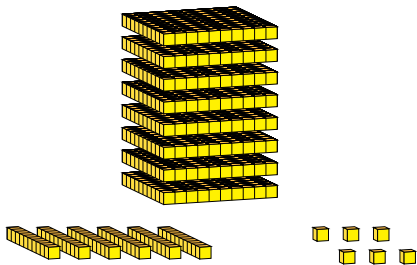
1



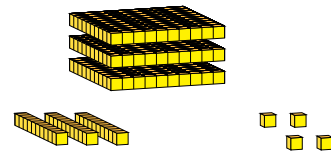
227




412



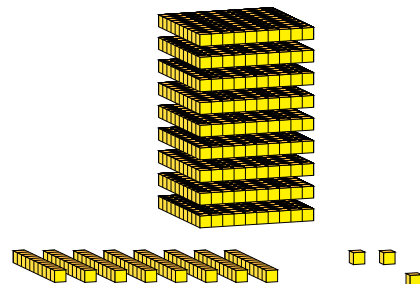
866



334



651



983