

Representing Numbers (J)

What number is shown in each group of base ten blocks?



100



10



1

Representing Numbers (J) Answers

What number is shown in each group of base ten blocks?




100



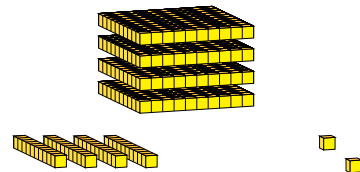
10



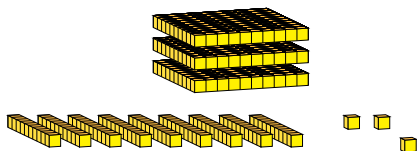
1



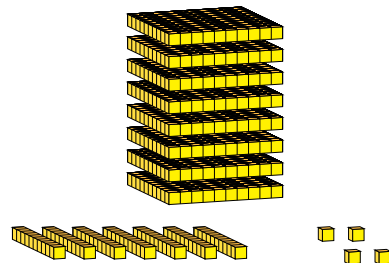
651



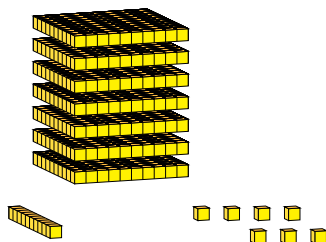
442



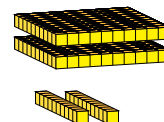
393



874



717



220