

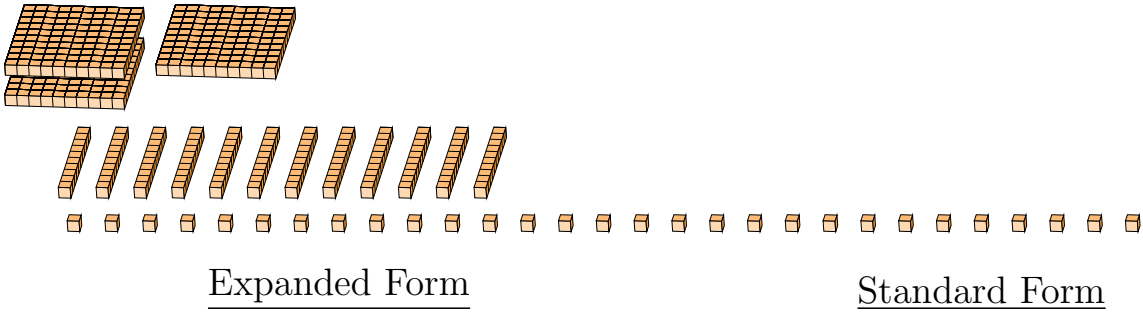
# Regrouping Base Ten Blocks (A)

Name: \_\_\_\_\_

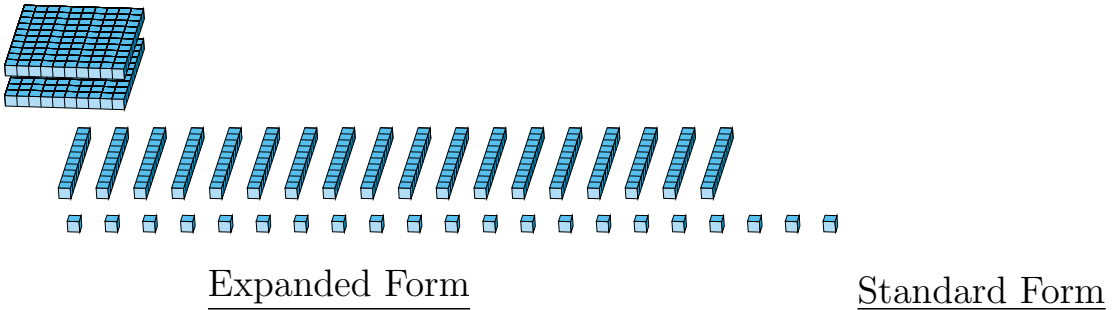
Date: \_\_\_\_\_

What number is shown in each group of base ten blocks?

1.



2.




# Regrouping Base Ten Blocks (A) Answers

Name: \_\_\_\_\_

Date: \_\_\_\_\_

What number is shown in each group of base ten blocks?

1.



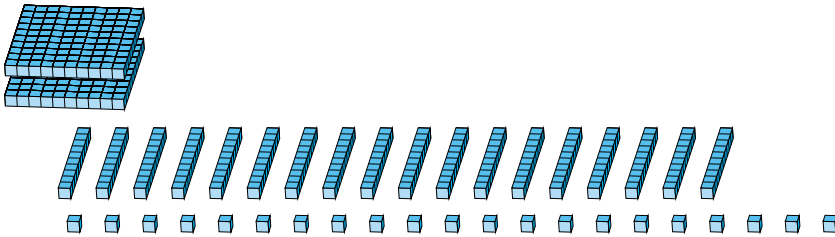
Expanded Form

Standard Form

$$\begin{aligned} &(1 \times 100) + (12 \times 10) + (29 \times 1) \\ &(2 \times 100) + (4 \times 10) + (9 \times 1) \\ &200 + 40 + 9 \end{aligned}$$

249

2.



Expanded Form

Standard Form

$$\begin{aligned} &(2 \times 100) + (18 \times 10) + (21 \times 1) \\ &(4 \times 100) + (0 \times 10) + (1 \times 1) \\ &400 + 0 + 1 \end{aligned}$$

401