

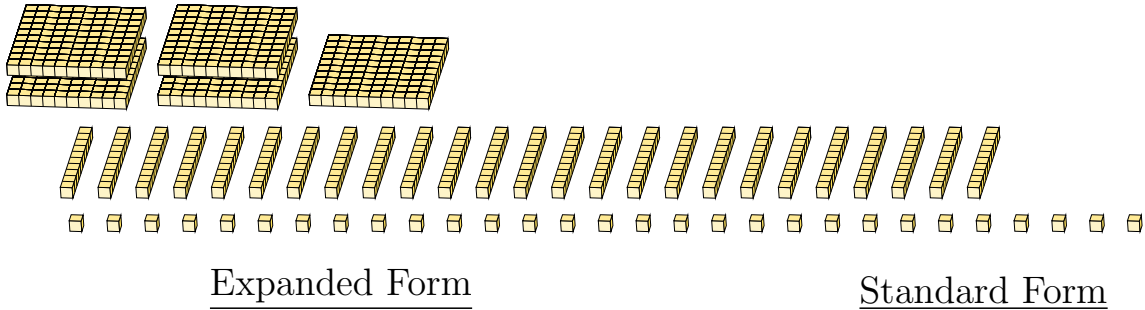
Regrouping Base Ten Blocks (B)

Name: _____

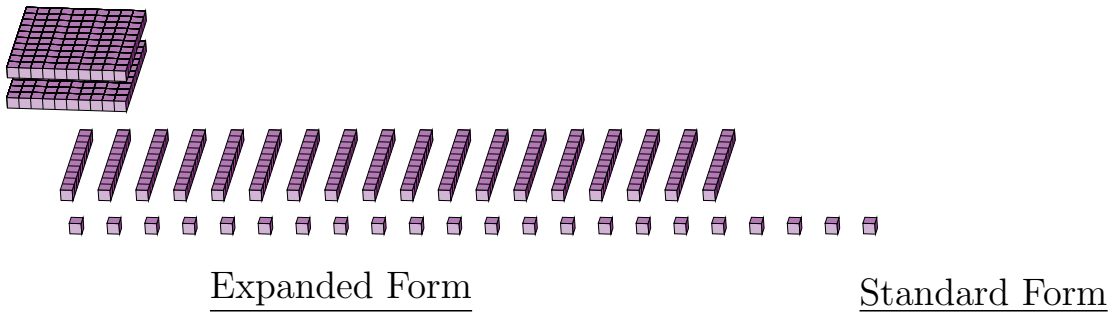
Date: _____

What number is shown in each group of base ten blocks?

1.



2.



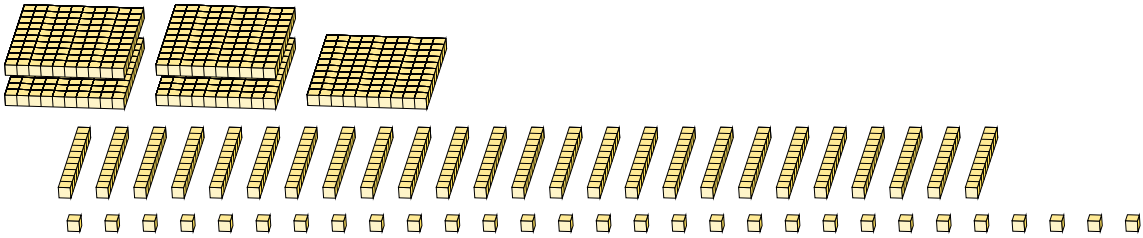
Regrouping Base Ten Blocks (B) Answers

Name: _____

Date: _____

What number is shown in each group of base ten blocks?

1.



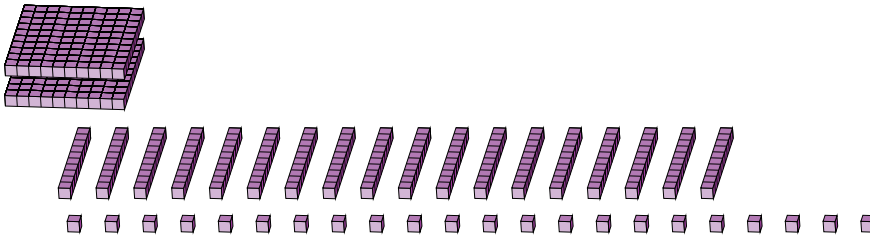
Expanded Form

Standard Form

$$\begin{aligned} &(5 \times 100) + (7 \times 10) + (9 \times 1) \\ &(7 \times 100) + (7 \times 10) + (9 \times 1) \\ &700 + 70 + 9 \end{aligned}$$

779

2.



Expanded Form

Standard Form

$$\begin{aligned} &(2 \times 100) + (18 \times 10) + (2 \times 1) \\ &(4 \times 100) + (0 \times 10) + (2 \times 1) \\ &400 + 0 + 2 \end{aligned}$$

402