

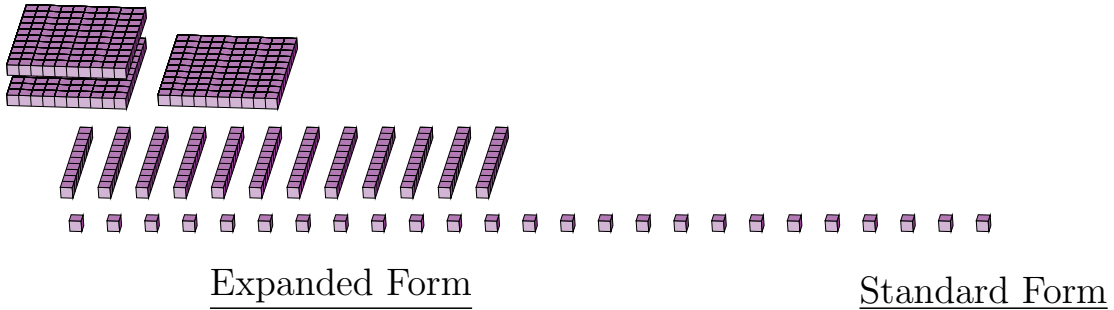
Regrouping Base Ten Blocks (C)

Name: _____

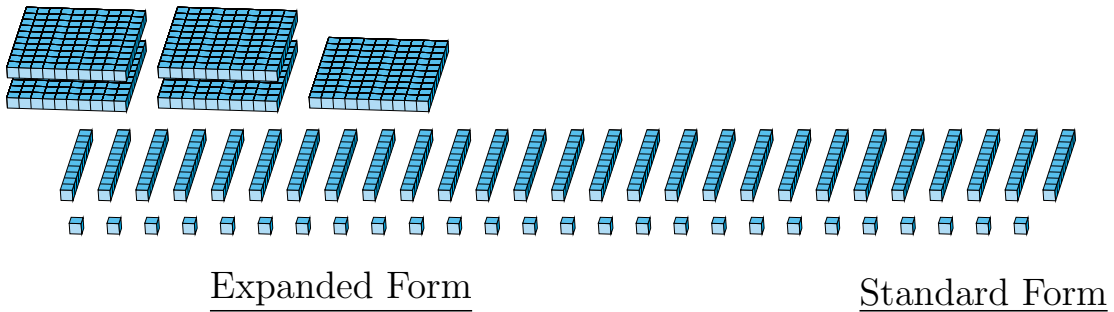
Date: _____

What number is shown in each group of base ten blocks?

1.



2.



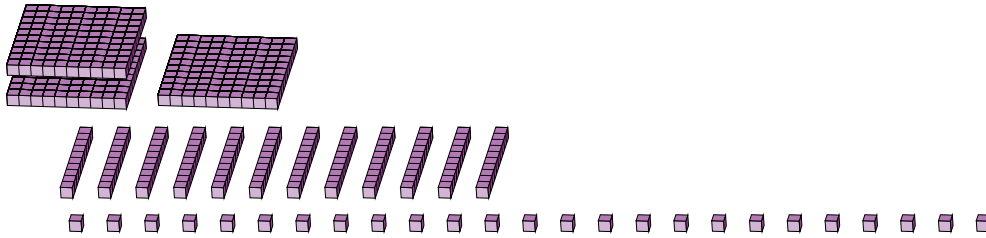
Regrouping Base Ten Blocks (C) Answers

Name: _____

Date: _____

What number is shown in each group of base ten blocks?

1.



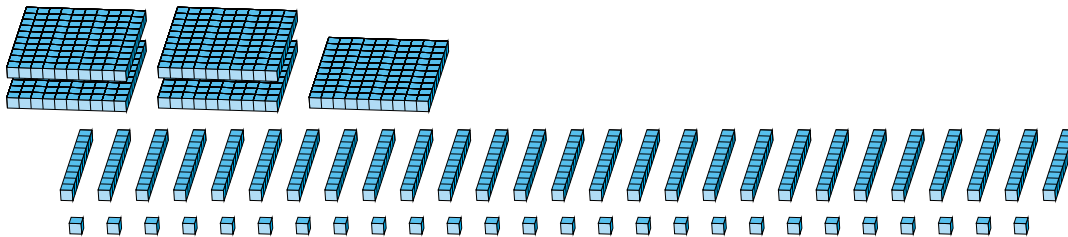
Expanded Form

Standard Form

$$\begin{aligned}
 &(3 \times 100) + (12 \times 10) + (25 \times 1) \\
 &(4 \times 100) + (4 \times 10) + (5 \times 1) \\
 &400 + 40 + 5
 \end{aligned}$$

445

2.



Expanded Form

Standard Form

$$\begin{aligned}
 &(5 \times 100) + (27 \times 10) + (26 \times 1) \\
 &(7 \times 100) + (9 \times 10) + (6 \times 1) \\
 &700 + 90 + 6
 \end{aligned}$$

796