

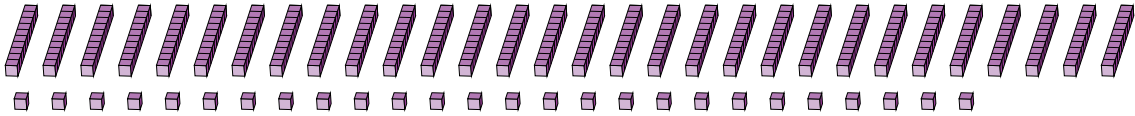
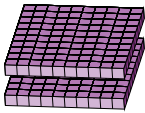
Regrouping Base Ten Blocks (D)

Name: _____

Date: _____

What number is shown in each group of base ten blocks?

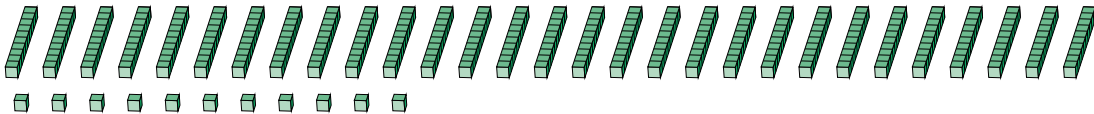
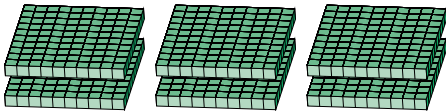
1.



Expanded Form

Standard Form

2.



Expanded Form

Standard Form