

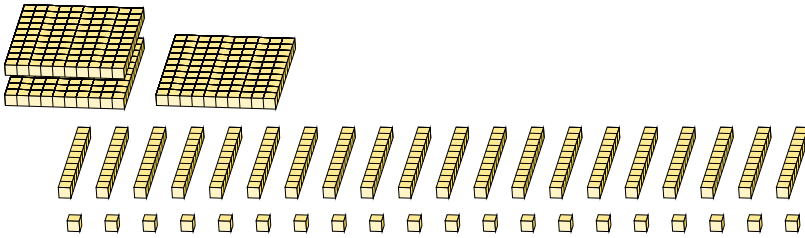
Regrouping Base Ten Blocks (E)

Name: _____

Date: _____

What number is shown in each group of base ten blocks?

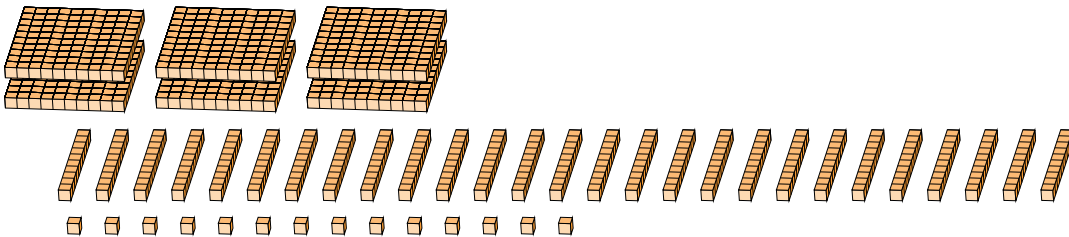
1.



Expanded Form

Standard Form

2.



Expanded Form

Standard Form

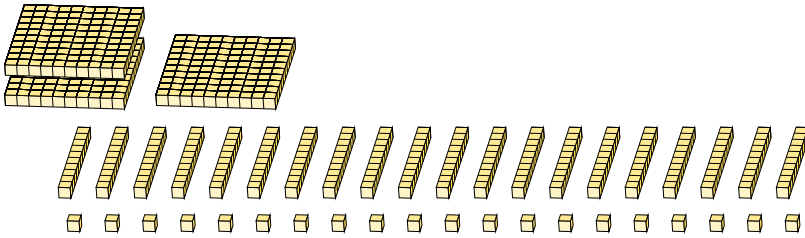
Regrouping Base Ten Blocks (E) Answers

Name: _____

Date: _____

What number is shown in each group of base ten blocks?

1.



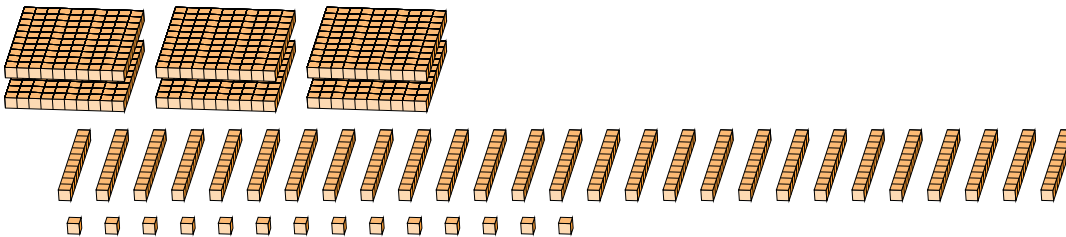
Expanded Form

$$\begin{aligned} &(3 \times 100) + (20 \times 10) + (20 \times 1) \\ &(5 \times 100) + (2 \times 10) + (0 \times 1) \\ &500 + 20 + 0 \end{aligned}$$

Standard Form

520

2.



Expanded Form

$$\begin{aligned} &(6 \times 100) + (27 \times 10) + (14 \times 1) \\ &(8 \times 100) + (8 \times 10) + (4 \times 1) \\ &800 + 80 + 4 \end{aligned}$$

Standard Form

884