

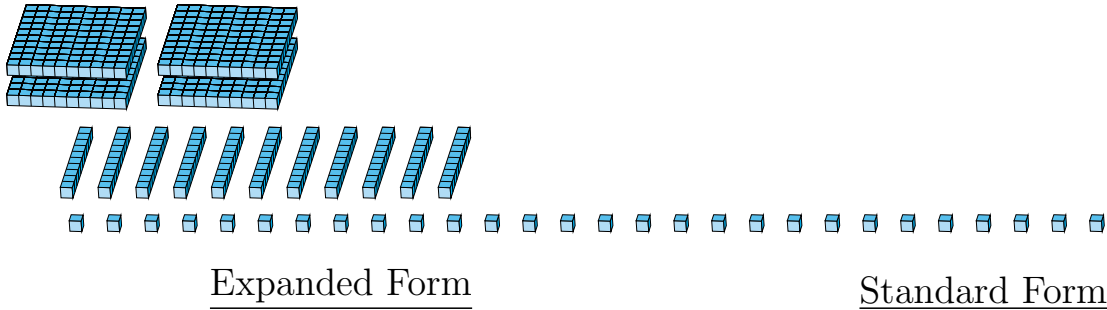
# Regrouping Base Ten Blocks (F)

Name: \_\_\_\_\_

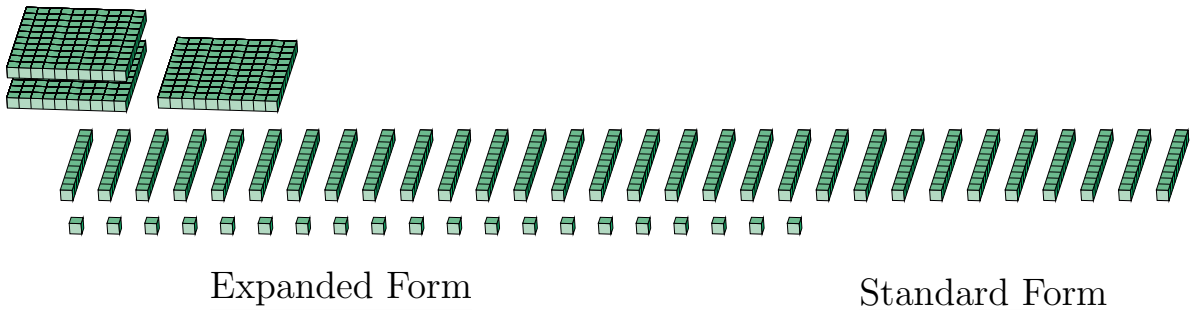
Date: \_\_\_\_\_

What number is shown in each group of base ten blocks?

1.



2.



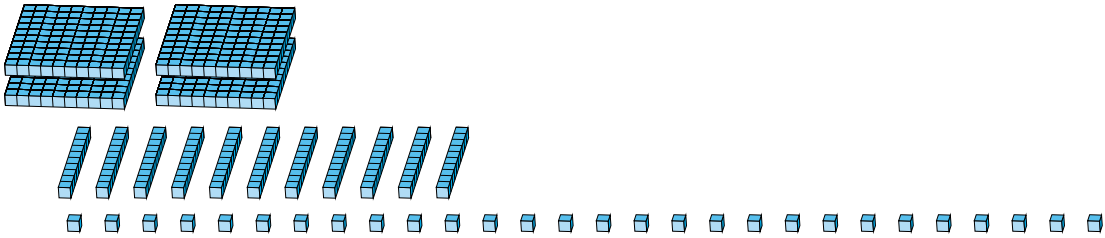
# Regrouping Base Ten Blocks (F) Answers

Name: \_\_\_\_\_

Date: \_\_\_\_\_

What number is shown in each group of base ten blocks?

1.



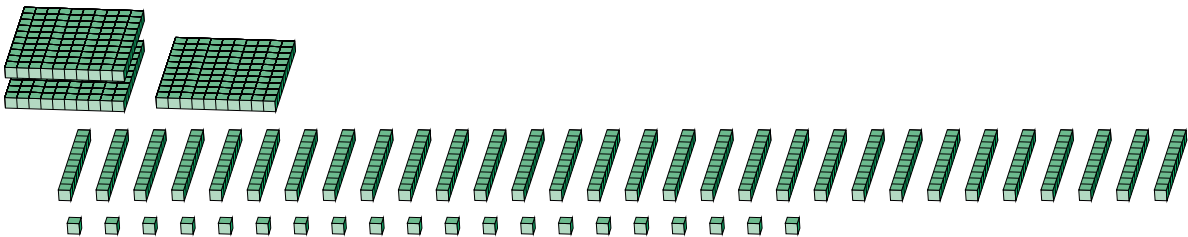
Expanded Form

Standard Form

$$\begin{aligned} &(4 \times 100) + (11 \times 10) + (28 \times 1) \\ &(5 \times 100) + (3 \times 10) + (8 \times 1) \\ &500 + 30 + 8 \end{aligned}$$

538

2.



Expanded Form

Standard Form

$$\begin{aligned} &(3 \times 100) + (30 \times 10) + (20 \times 1) \\ &(6 \times 100) + (2 \times 10) + (0 \times 1) \\ &600 + 20 + 0 \end{aligned}$$

620