

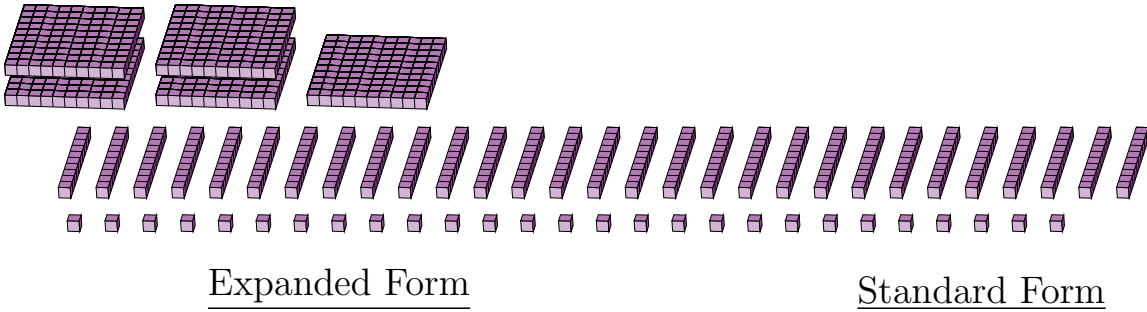
Regrouping Base Ten Blocks (H)

Name: _____

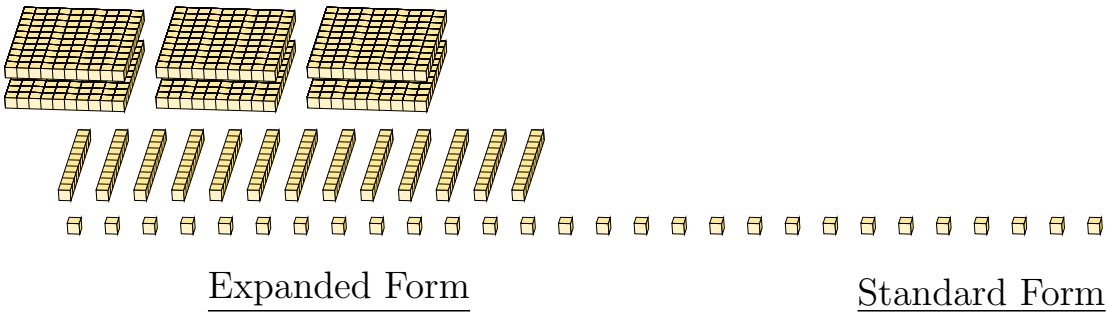
Date: _____

What number is shown in each group of base ten blocks?

1.



2.



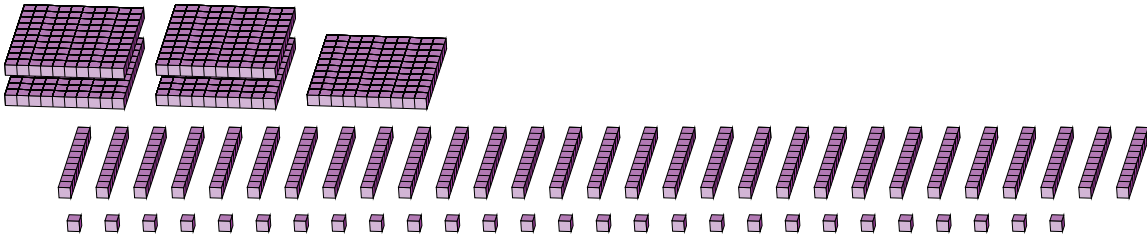
Regrouping Base Ten Blocks (H) Answers

Name: _____

Date: _____

What number is shown in each group of base ten blocks?

1.




Expanded Form

Standard Form

$$\begin{aligned}
 &(5 \times 100) + (29 \times 10) + (27 \times 1) \\
 &(8 \times 100) + (1 \times 10) + (7 \times 1) \\
 &800 + 10 + 7
 \end{aligned}$$

817

2.



Expanded Form

Standard Form

$$\begin{aligned}
 &(6 \times 100) + (13 \times 10) + (28 \times 1) \\
 &(7 \times 100) + (5 \times 10) + (8 \times 1) \\
 &700 + 50 + 8
 \end{aligned}$$

758