

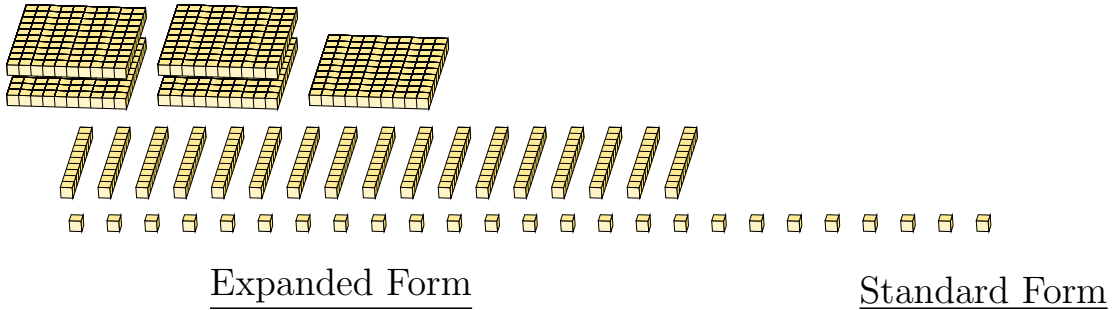
Regrouping Base Ten Blocks (I)

Name: _____

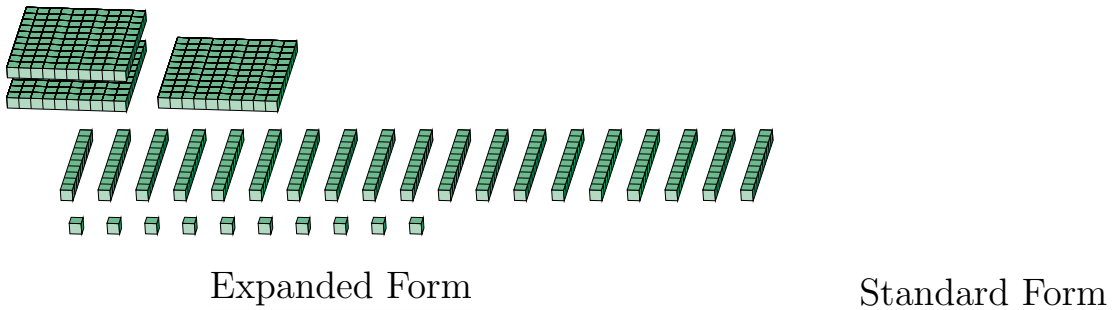
Date: _____

What number is shown in each group of base ten blocks?

1.



2.



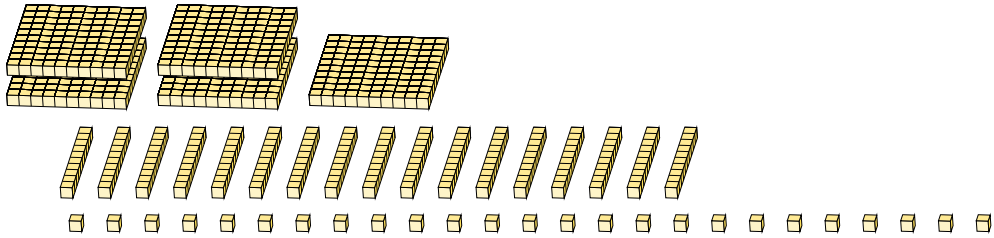
Regrouping Base Ten Blocks (I) Answers

Name: _____

Date: _____

What number is shown in each group of base ten blocks?

1.



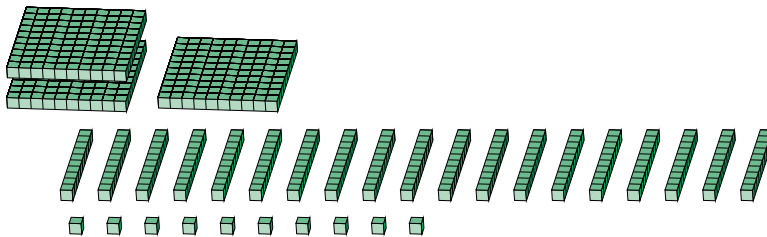
Expanded Form

Standard Form

$$\begin{aligned}
 &(5 \times 100) + (17 \times 10) + (25 \times 1) \\
 &(6 \times 100) + (9 \times 10) + (5 \times 1) \\
 &600 + 90 + 5
 \end{aligned}$$

695

2.



Expanded Form

Standard Form

$$\begin{aligned}
 &(3 \times 100) + (19 \times 10) + (10 \times 1) \\
 &(5 \times 100) + (0 \times 10) + (0 \times 1) \\
 &500 + 0 + 0
 \end{aligned}$$

500