

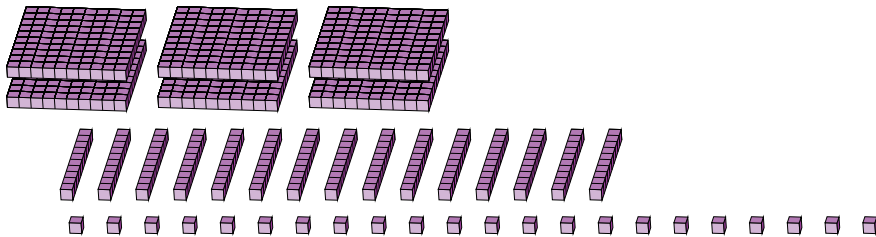
# Regrouping Base Ten Blocks (J)

Name: \_\_\_\_\_

Date: \_\_\_\_\_

What number is shown in each group of base ten blocks?


1.



Expanded Form

Standard Form

2.



Expanded Form

Standard Form

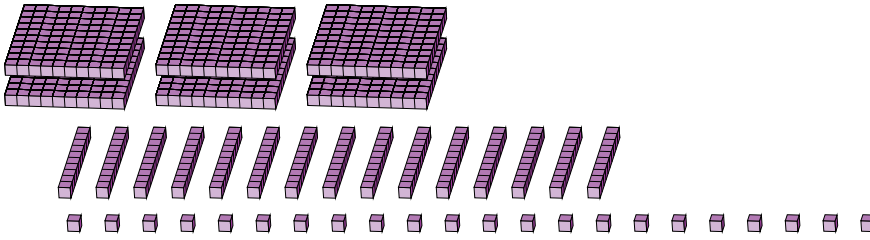
# Regrouping Base Ten Blocks (J) Answers

Name: \_\_\_\_\_

Date: \_\_\_\_\_

What number is shown in each group of base ten blocks?

1.



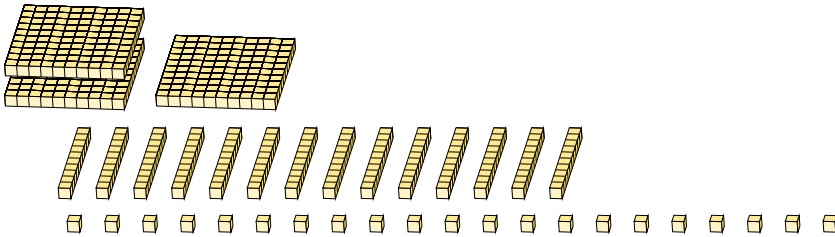
Expanded Form

Standard Form

$$\begin{aligned} &(6 \times 100) + (15 \times 10) + (22 \times 1) \\ &(7 \times 100) + (7 \times 10) + (2 \times 1) \\ &700 + 70 + 2 \end{aligned}$$

772

2.



Expanded Form

Standard Form

$$\begin{aligned} &(3 \times 100) + (14 \times 10) + (21 \times 1) \\ &(4 \times 100) + (6 \times 10) + (1 \times 1) \\ &400 + 60 + 1 \end{aligned}$$

461