

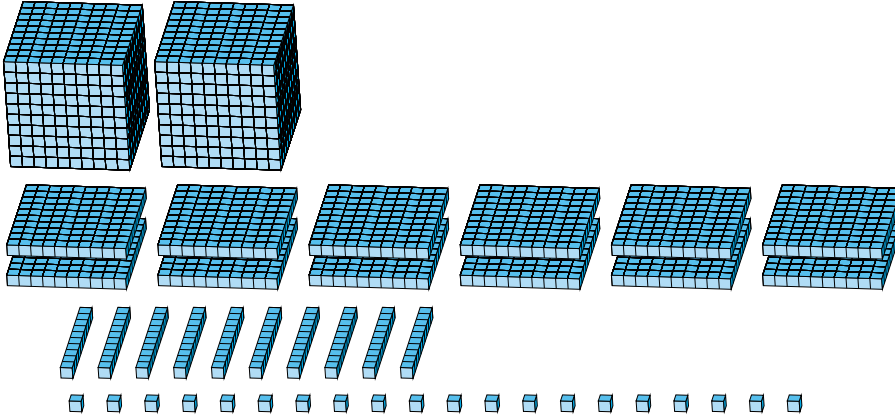
Regrouping Base Ten Blocks (A)

Name: _____

Date: _____

What number is shown in each group of base ten blocks?

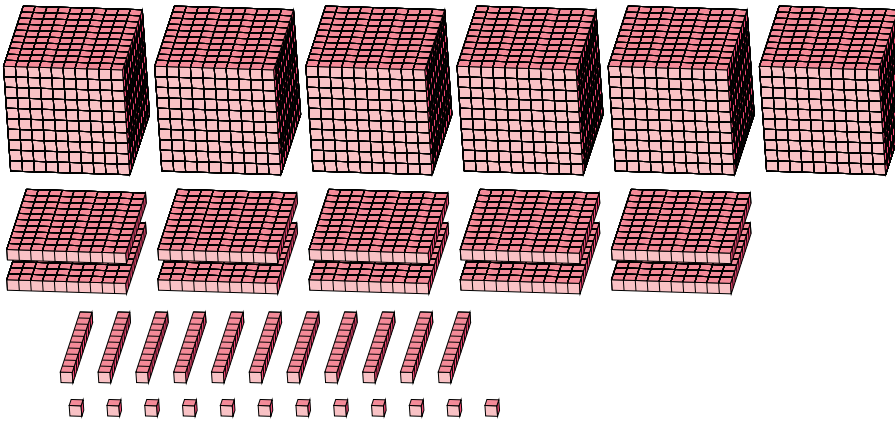
1.



Expanded Form

Standard Form

2.



Expanded Form

Standard Form

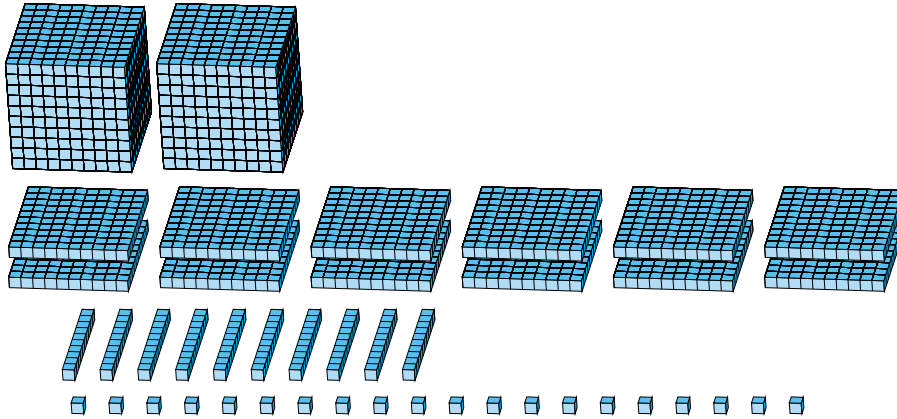
Regrouping Base Ten Blocks (A) Answers

Name: _____

Date: _____

What number is shown in each group of base ten blocks?

1.



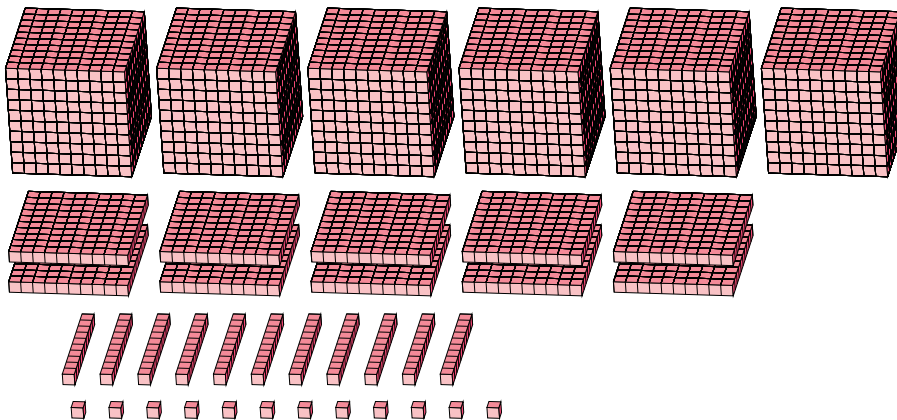
Expanded Form

Standard Form

$$\begin{aligned}
 &(2 \times 1000) + (12 \times 100) + (10 \times 10) + (20 \times 1) \\
 &(3 \times 1000) + (3 \times 100) + (2 \times 10) + (0 \times 1) \\
 &3000 + 300 + 20 + 0
 \end{aligned}$$

3320

2.



Expanded Form

Standard Form

$$\begin{aligned}
 &(6 \times 1000) + (10 \times 100) + (11 \times 10) + (12 \times 1) \\
 &(7 \times 1000) + (1 \times 100) + (2 \times 10) + (2 \times 1) \\
 &7000 + 100 + 20 + 2
 \end{aligned}$$

7122