

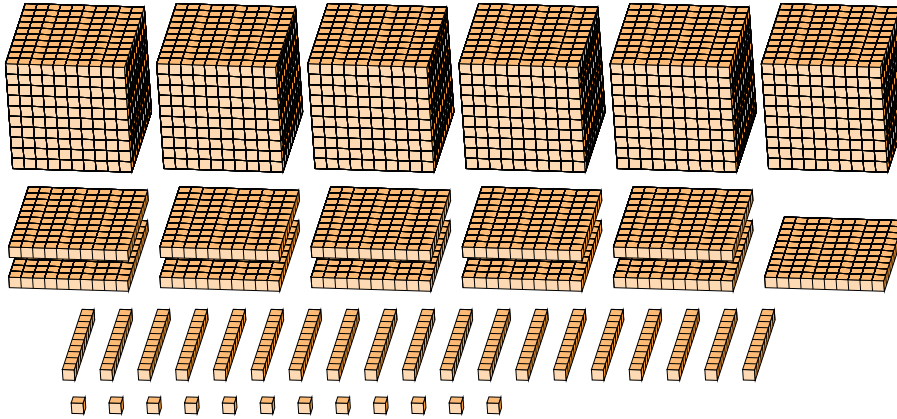
Regrouping Base Ten Blocks (B)

Name: _____

Date: _____

What number is shown in each group of base ten blocks?

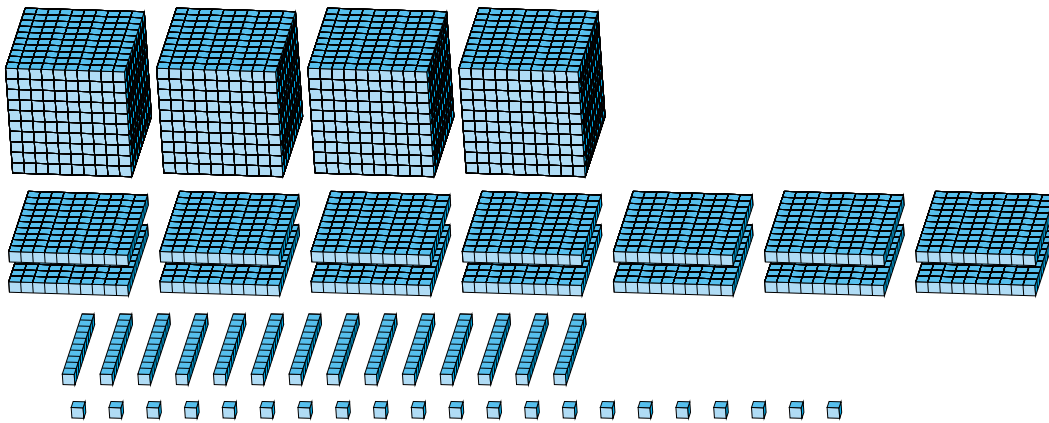
1.



Expanded Form

Standard Form

2.



Expanded Form

Standard Form

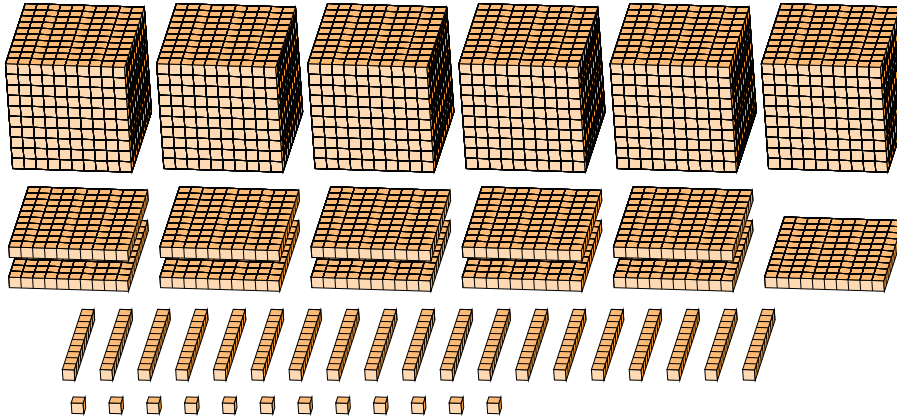
Regrouping Base Ten Blocks (B) Answers

Name: _____

Date: _____

What number is shown in each group of base ten blocks?

1.



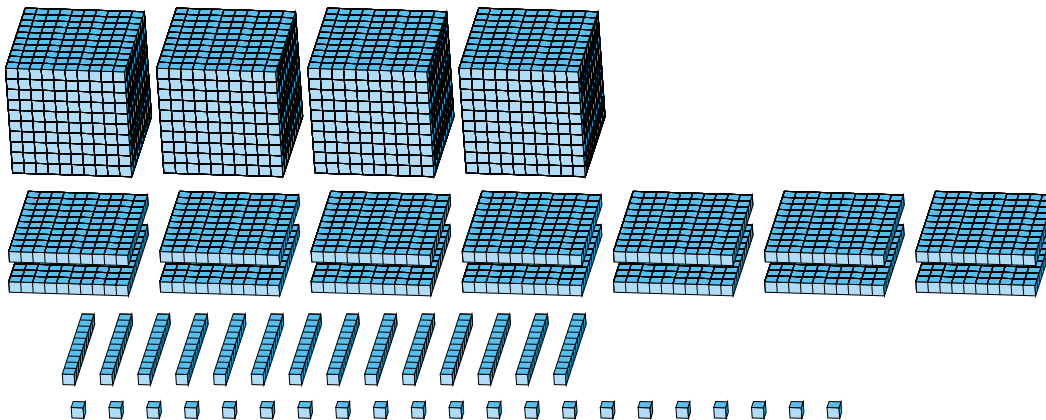
Expanded Form

Standard Form

$$\begin{aligned}
 &(6 \times 1000) + (11 \times 100) + (19 \times 10) + (12 \times 1) \\
 &(7 \times 1000) + (3 \times 100) + (0 \times 10) + (2 \times 1) \\
 &7000 + 300 + 0 + 2
 \end{aligned}$$

7302

2.



Expanded Form

Standard Form

$$\begin{aligned}
 &(4 \times 1000) + (14 \times 100) + (14 \times 10) + (21 \times 1) \\
 &(5 \times 1000) + (5 \times 100) + (6 \times 10) + (1 \times 1) \\
 &5000 + 500 + 60 + 1
 \end{aligned}$$

5561