

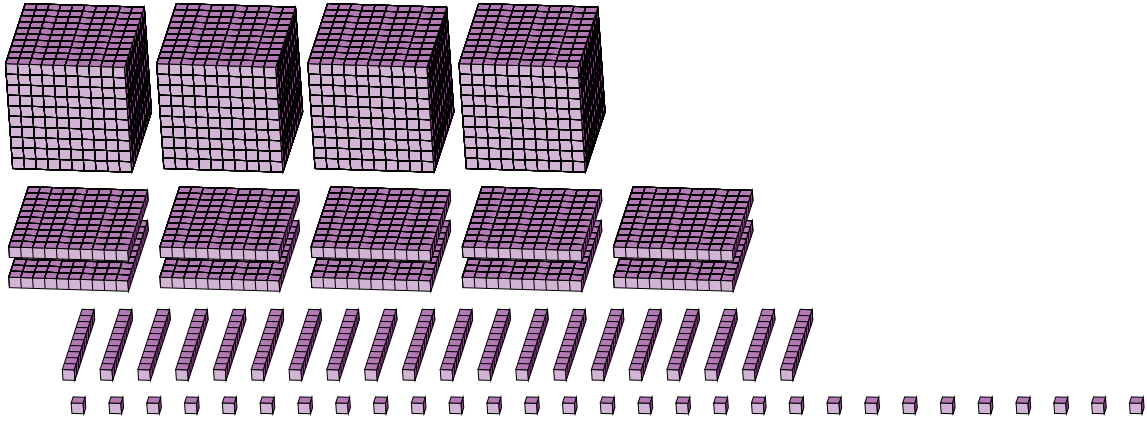
Regrouping Base Ten Blocks (C)

Name: _____

Date: _____

What number is shown in each group of base ten blocks?

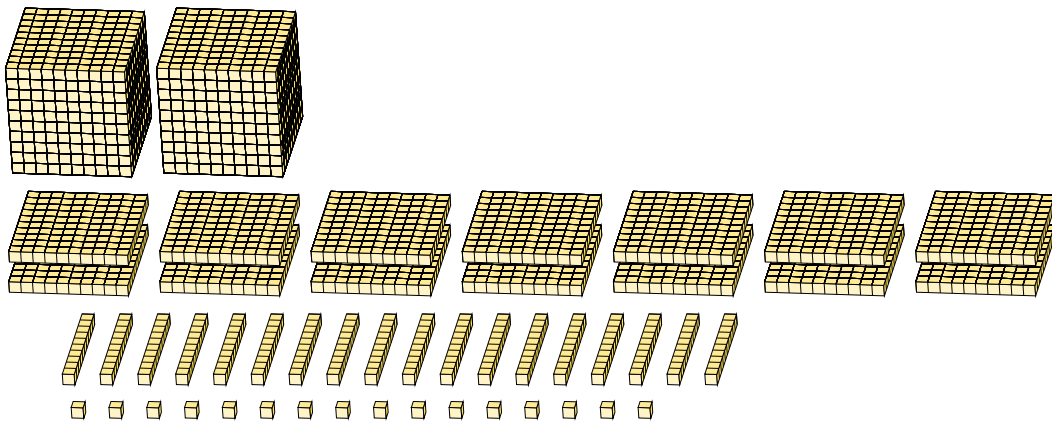
1.



Expanded Form

Standard Form

2.



Expanded Form

Standard Form

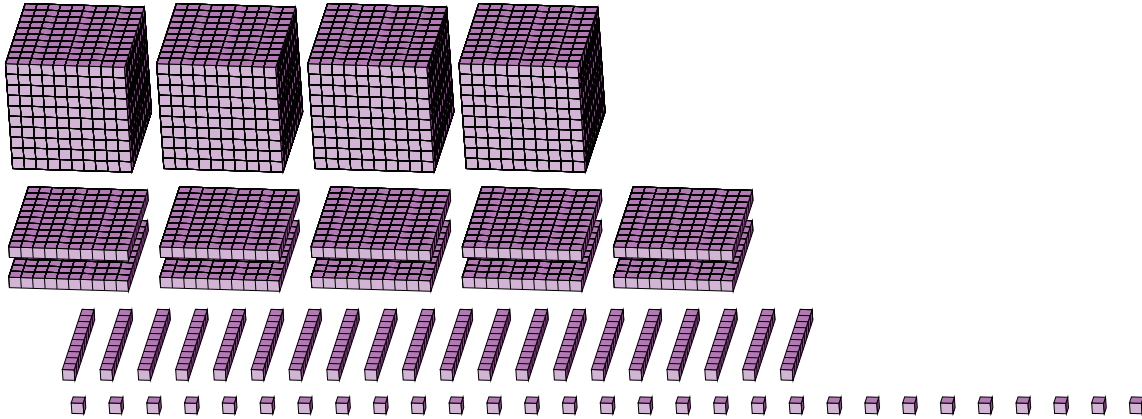
Regrouping Base Ten Blocks (C) Answers

Name: _____

Date: _____

What number is shown in each group of base ten blocks?

1.



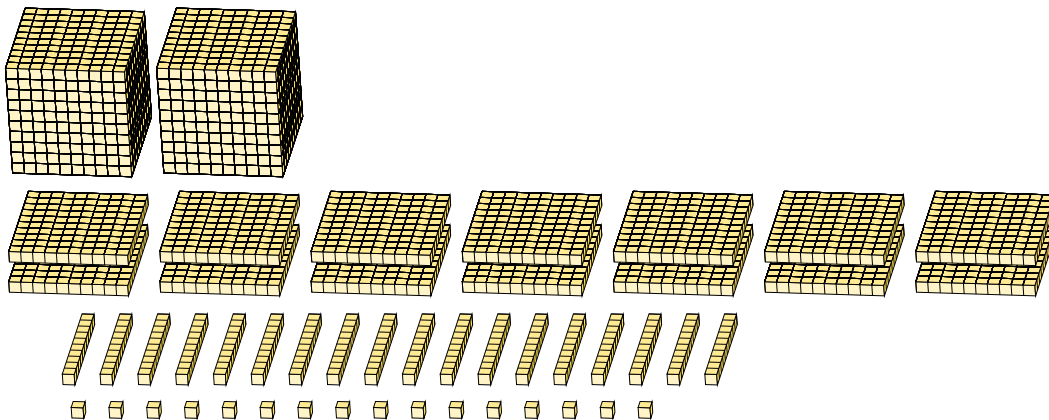
Expanded Form

Standard Form

$$\begin{aligned}
 &(4 \times 1000) + (10 \times 100) + (20 \times 10) + (29 \times 1) \\
 &(5 \times 1000) + (2 \times 100) + (2 \times 10) + (9 \times 1) \\
 &5000 + 200 + 20 + 9
 \end{aligned}$$

5229

2.



Expanded Form

Standard Form

$$\begin{aligned}
 &(2 \times 1000) + (14 \times 100) + (18 \times 10) + (16 \times 1) \\
 &(3 \times 1000) + (5 \times 100) + (9 \times 10) + (6 \times 1) \\
 &3000 + 500 + 90 + 6
 \end{aligned}$$

3596