

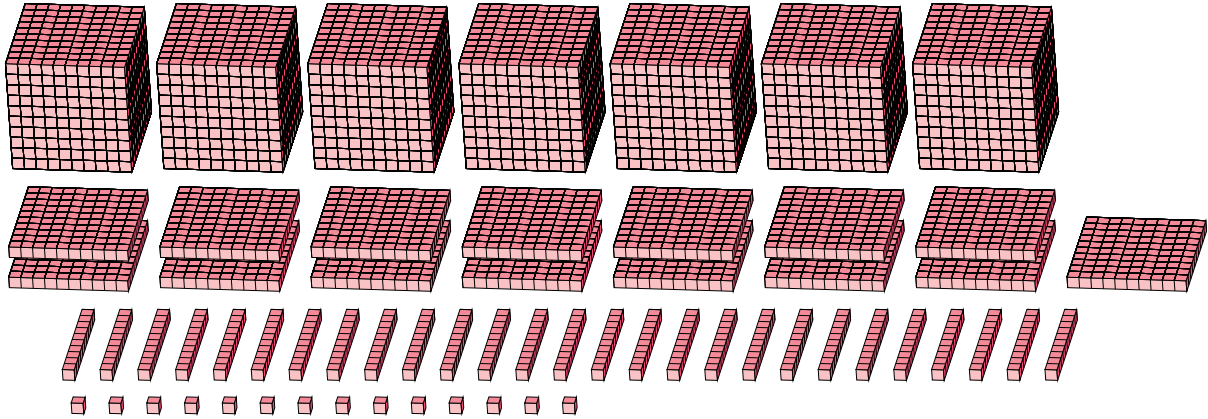
Regrouping Base Ten Blocks (D)

Name: _____

Date: _____

What number is shown in each group of base ten blocks?

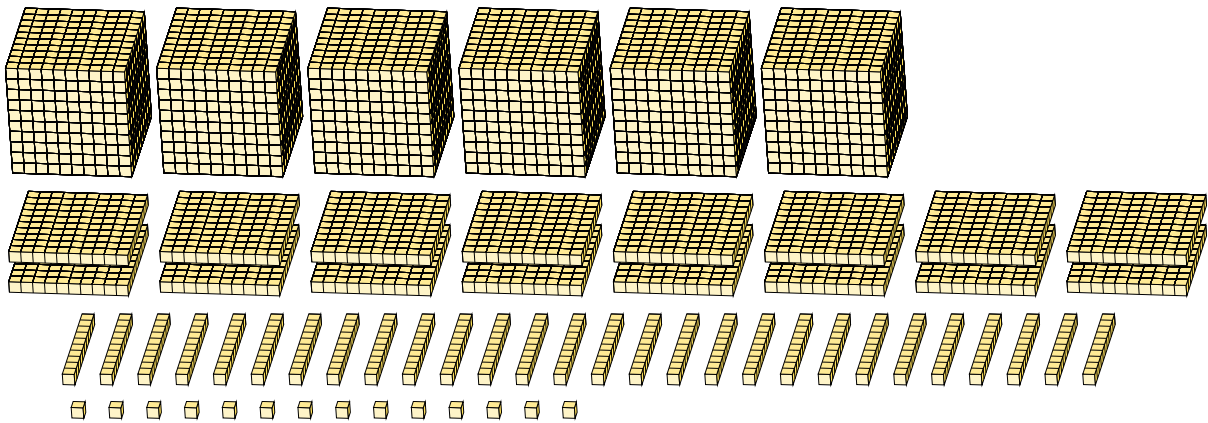
1.



Expanded Form

Standard Form

2.



Expanded Form

Standard Form

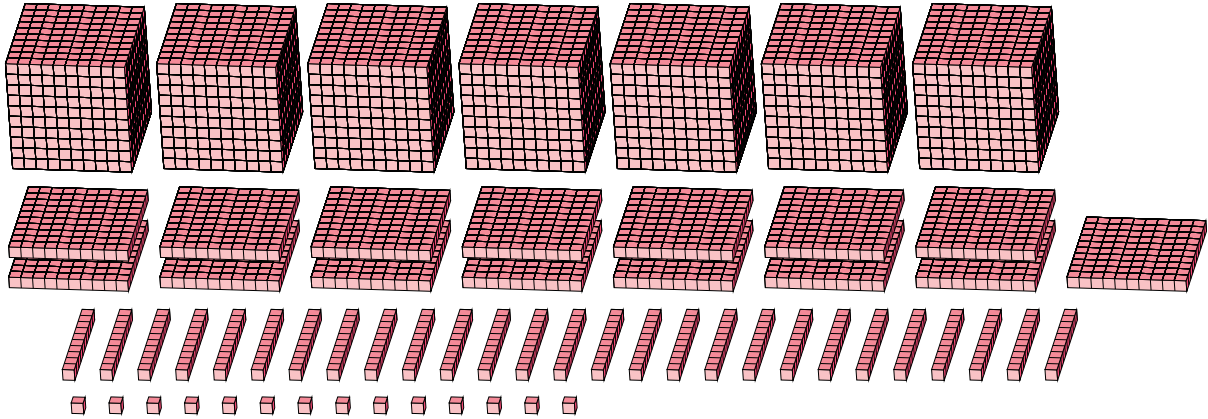
Regrouping Base Ten Blocks (D) Answers

Name: _____

Date: _____

What number is shown in each group of base ten blocks?

1.



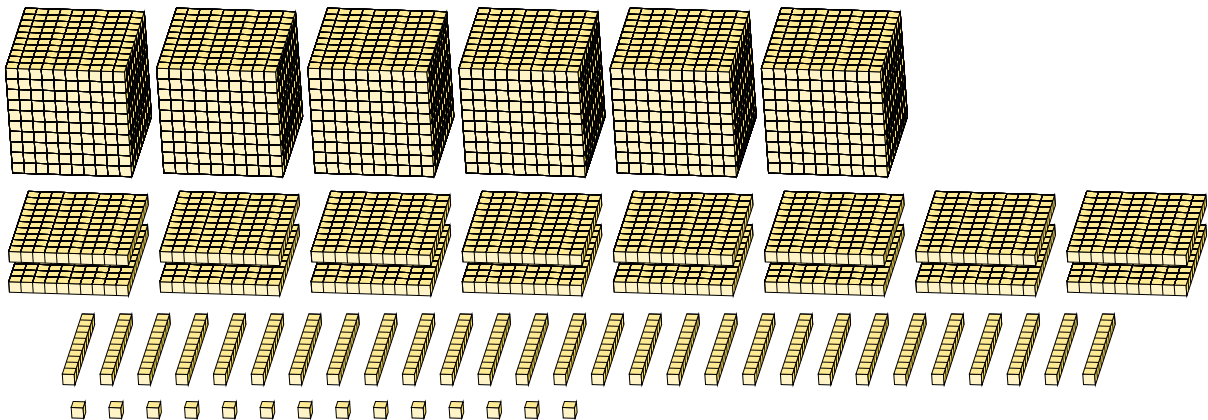
Expanded Form

Standard Form

$$\begin{aligned}
 &(7 \times 1000) + (15 \times 100) + (27 \times 10) + (14 \times 1) \\
 &(8 \times 1000) + (7 \times 100) + (8 \times 10) + (4 \times 1) \\
 &8000 + 700 + 80 + 4
 \end{aligned}$$

8784

2.



Expanded Form

Standard Form

$$\begin{aligned}
 &(6 \times 1000) + (16 \times 100) + (28 \times 10) + (14 \times 1) \\
 &(7 \times 1000) + (8 \times 100) + (9 \times 10) + (4 \times 1) \\
 &7000 + 800 + 90 + 4
 \end{aligned}$$

7894