

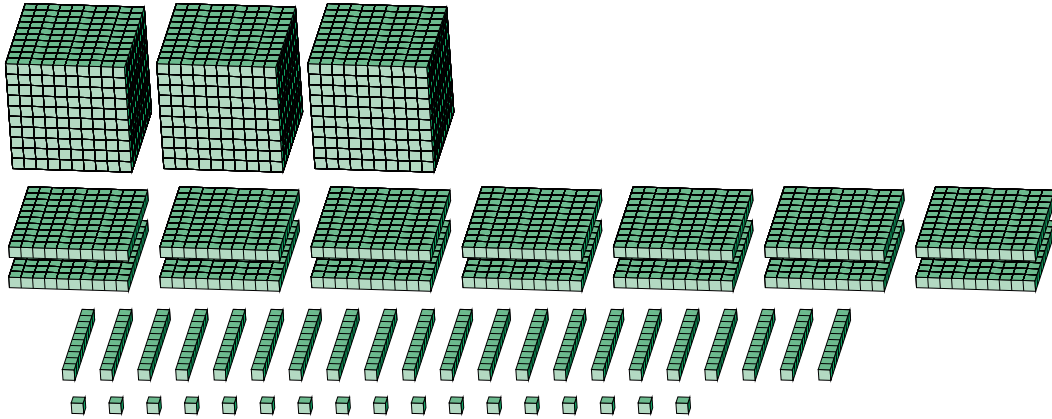
# Regrouping Base Ten Blocks (F)

Name: \_\_\_\_\_

Date: \_\_\_\_\_

What number is shown in each group of base ten blocks?

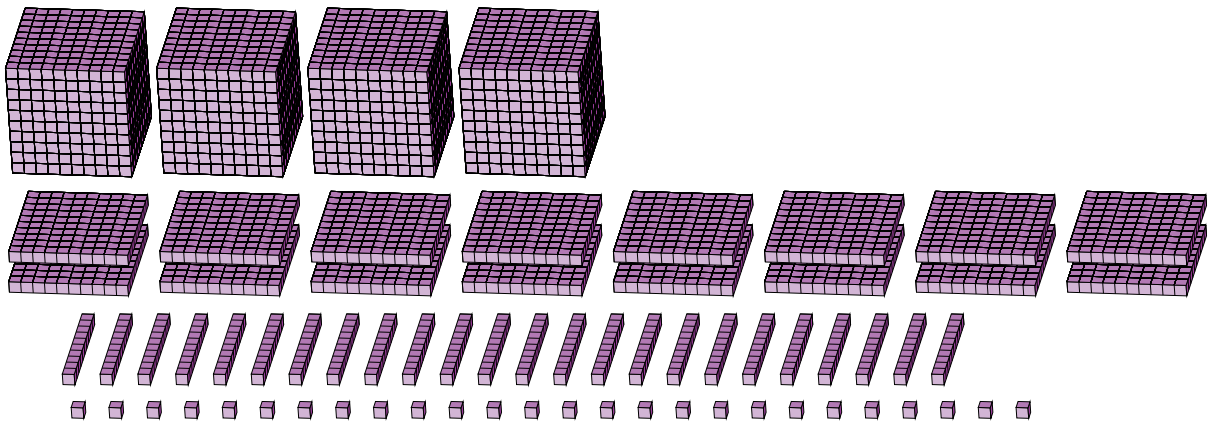
1.



Expanded Form

Standard Form

2.



Expanded Form

Standard Form

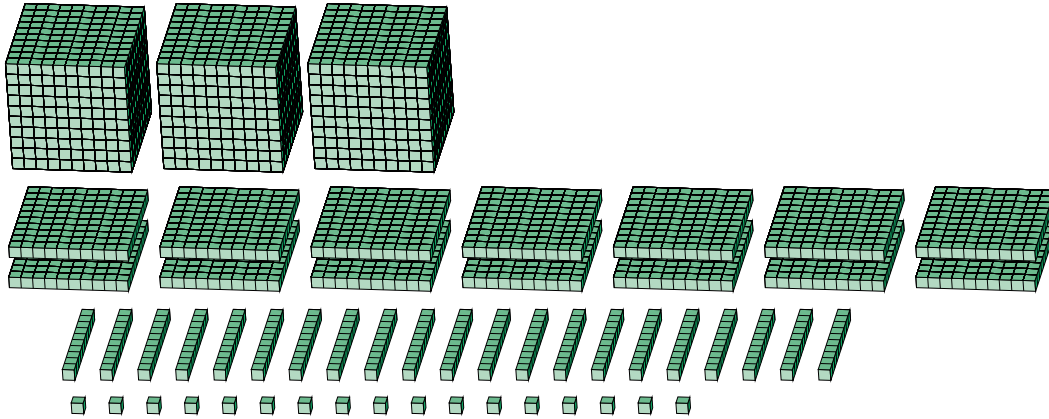
# Regrouping Base Ten Blocks (F) Answers

Name: \_\_\_\_\_

Date: \_\_\_\_\_

What number is shown in each group of base ten blocks?

1.



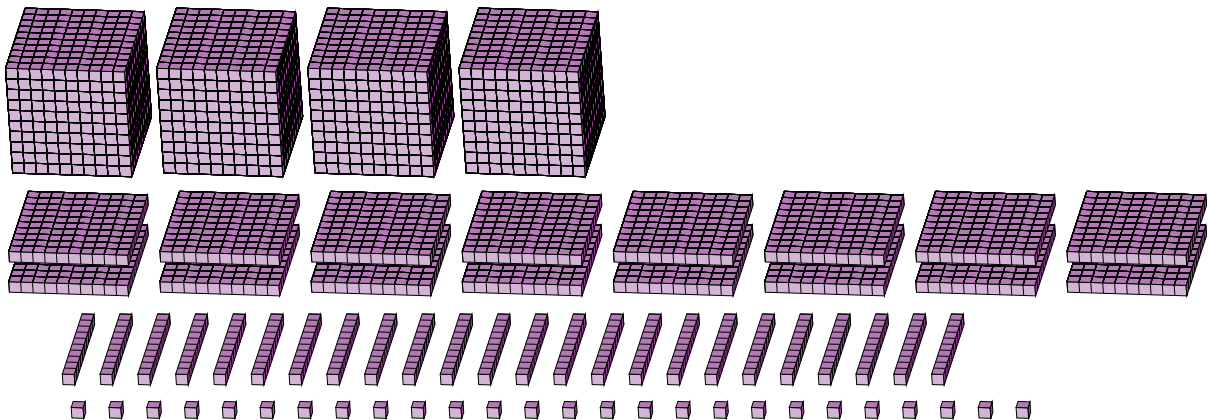
Expanded Form

Standard Form

$$\begin{aligned}
 &(3 \times 1000) + (14 \times 100) + (21 \times 10) + (17 \times 1) \\
 &(4 \times 1000) + (6 \times 100) + (2 \times 10) + (7 \times 1) \\
 &4000 + 600 + 20 + 7
 \end{aligned}$$

4627

2.



Expanded Form

Standard Form

$$\begin{aligned}
 &(4 \times 1000) + (16 \times 100) + (24 \times 10) + (26 \times 1) \\
 &(5 \times 1000) + (8 \times 100) + (6 \times 10) + (6 \times 1) \\
 &5000 + 800 + 60 + 6
 \end{aligned}$$

5866