

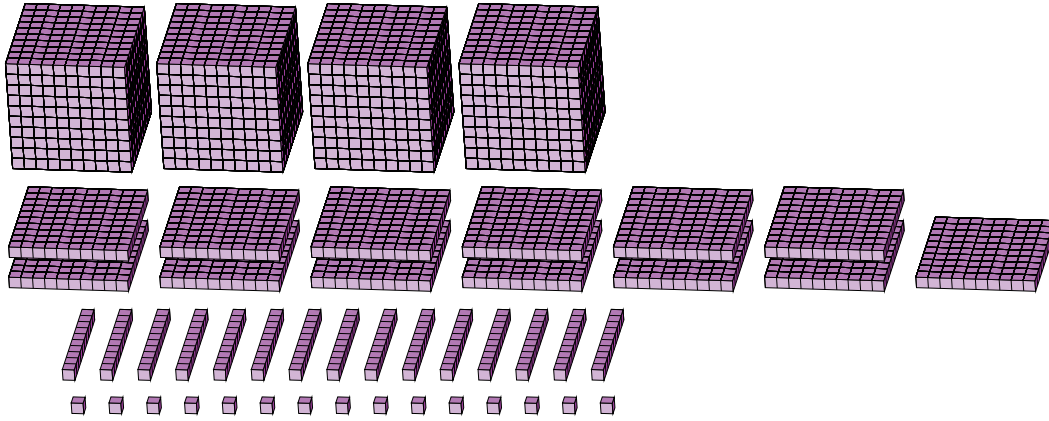
# Regrouping Base Ten Blocks (G)

Name: \_\_\_\_\_

Date: \_\_\_\_\_

What number is shown in each group of base ten blocks?

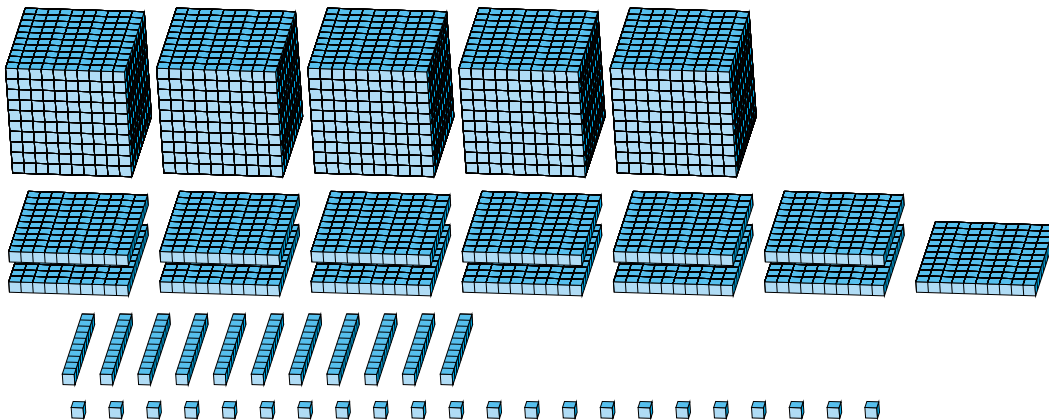
1.



Expanded Form

Standard Form

2.



Expanded Form

Standard Form

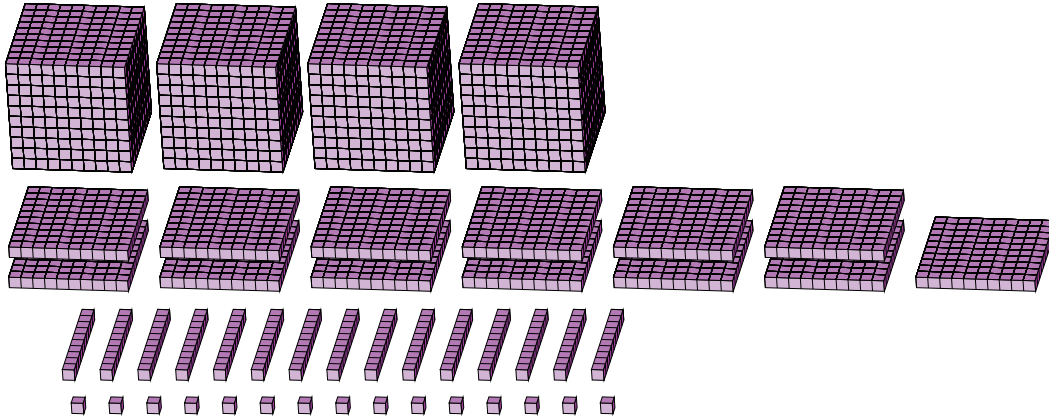
# Regrouping Base Ten Blocks (G) Answers

Name: \_\_\_\_\_

Date: \_\_\_\_\_

What number is shown in each group of base ten blocks?

1.



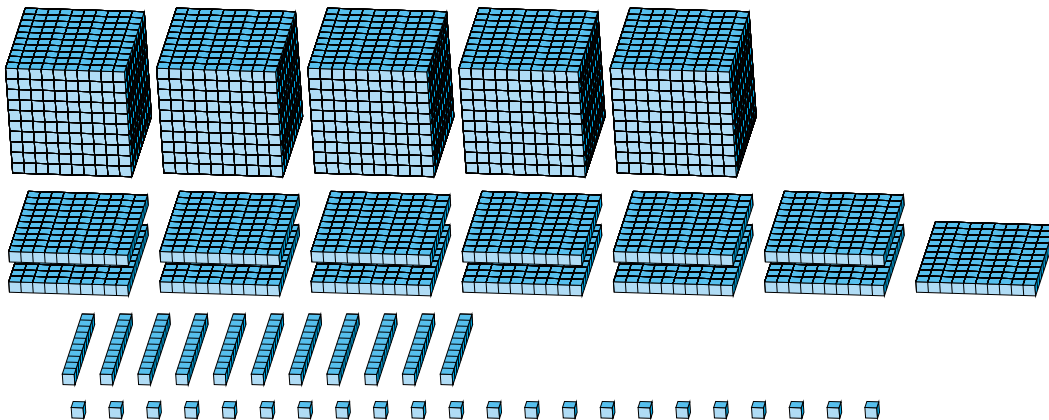
Expanded Form

Standard Form

$$\begin{aligned}
 &(4 \times 1000) + (13 \times 100) + (15 \times 10) + (15 \times 1) \\
 &(5 \times 1000) + (4 \times 100) + (6 \times 10) + (5 \times 1) \\
 &5000 + 400 + 60 + 5
 \end{aligned}$$

5465

2.



Expanded Form

Standard Form

$$\begin{aligned}
 &(5 \times 1000) + (13 \times 100) + (11 \times 10) + (22 \times 1) \\
 &(6 \times 1000) + (4 \times 100) + (3 \times 10) + (2 \times 1) \\
 &6000 + 400 + 30 + 2
 \end{aligned}$$

6432