

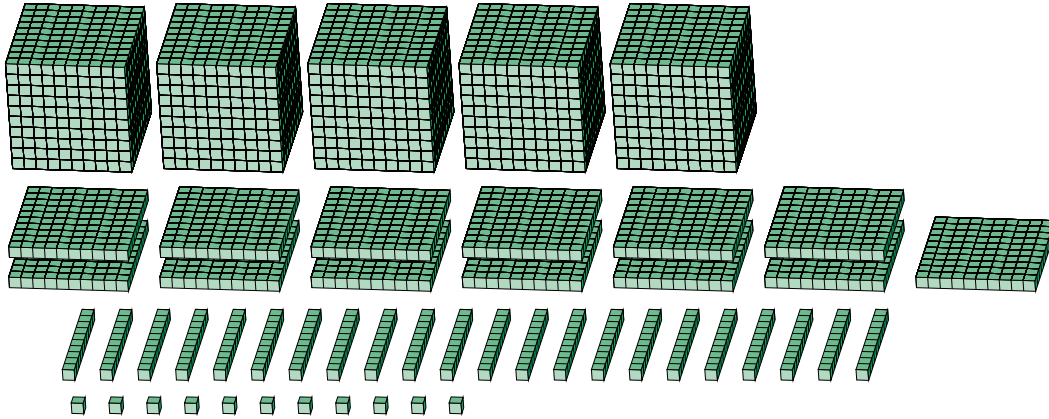
Regrouping Base Ten Blocks (H)

Name: _____

Date: _____

What number is shown in each group of base ten blocks?

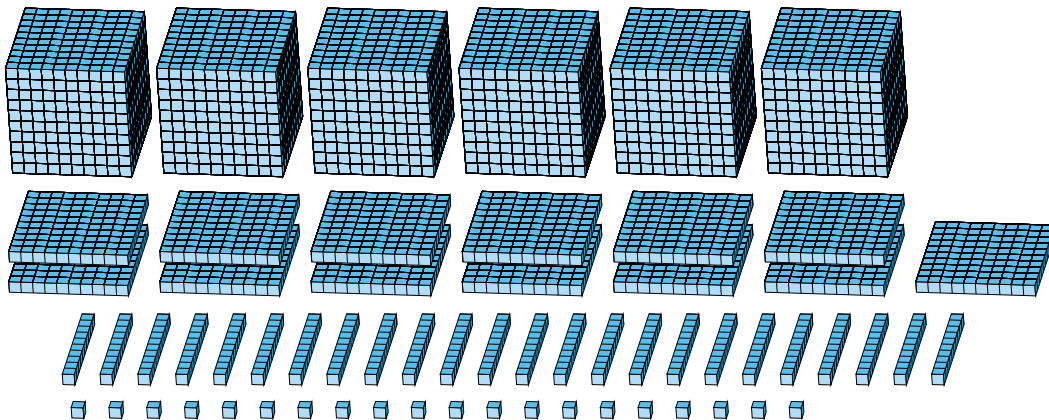
1.



Expanded Form

Standard Form

2.



Expanded Form

Standard Form

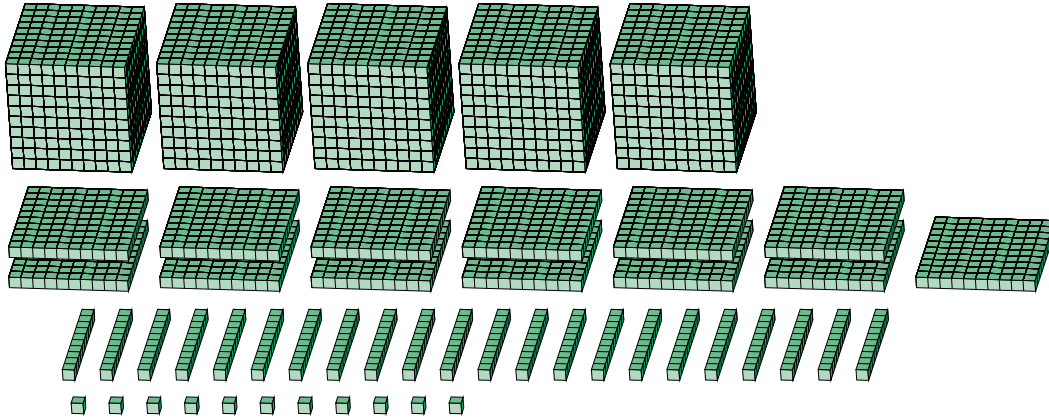
Regrouping Base Ten Blocks (H) Answers

Name: _____

Date: _____

What number is shown in each group of base ten blocks?

1.



Expanded Form

Standard Form

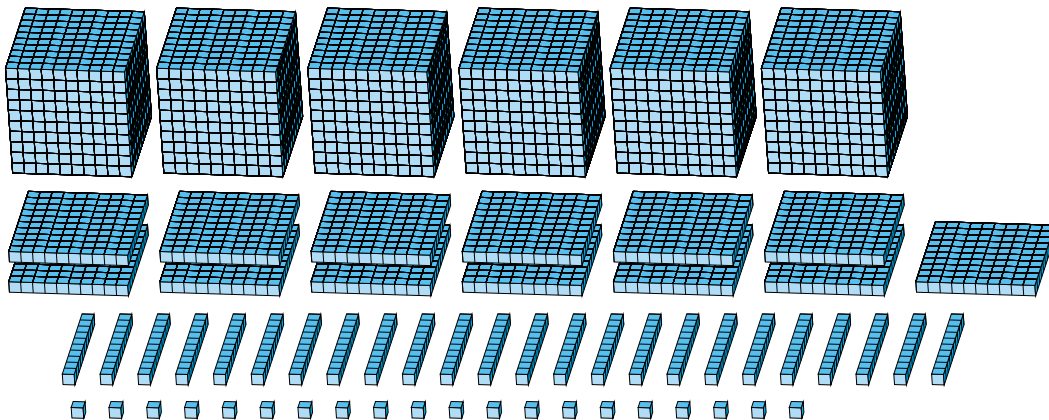
$$(5 \times 1000) + (13 \times 100) + (22 \times 10) + (11 \times 1)$$

$$(6 \times 1000) + (5 \times 100) + (3 \times 10) + (1 \times 1)$$

$$6000 + 500 + 30 + 1$$

6531

2.



Expanded Form

Standard Form

$$(6 \times 1000) + (13 \times 100) + (24 \times 10) + (20 \times 1)$$

$$(7 \times 1000) + (5 \times 100) + (6 \times 10) + (0 \times 1)$$

$$7000 + 500 + 60 + 0$$

7560