

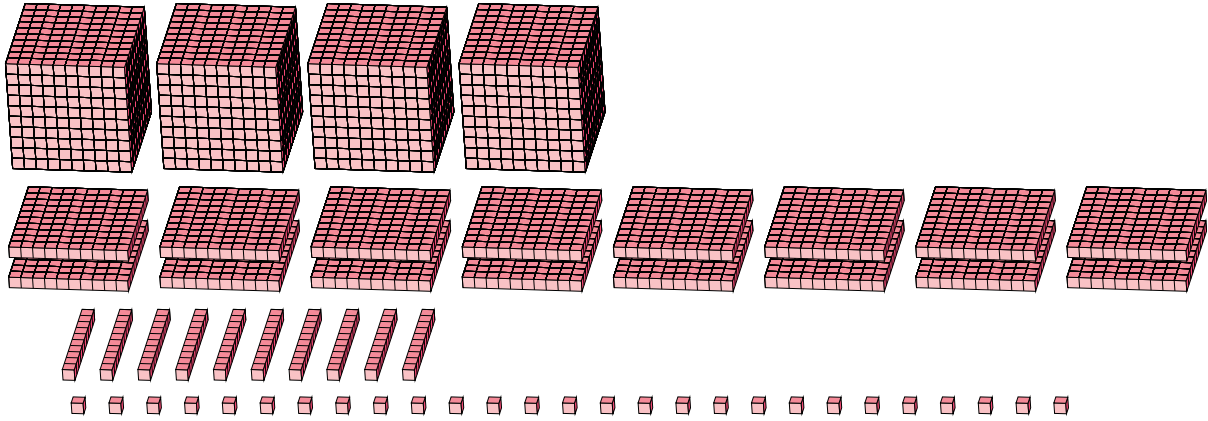
Regrouping Base Ten Blocks (J)

Name: _____

Date: _____

What number is shown in each group of base ten blocks?

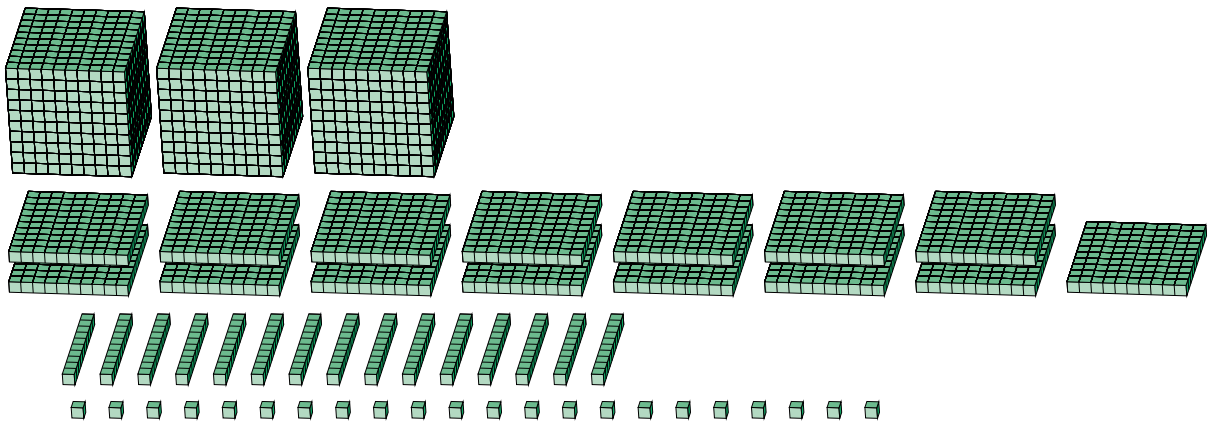
1.



Expanded Form

Standard Form

2.



Expanded Form

Standard Form

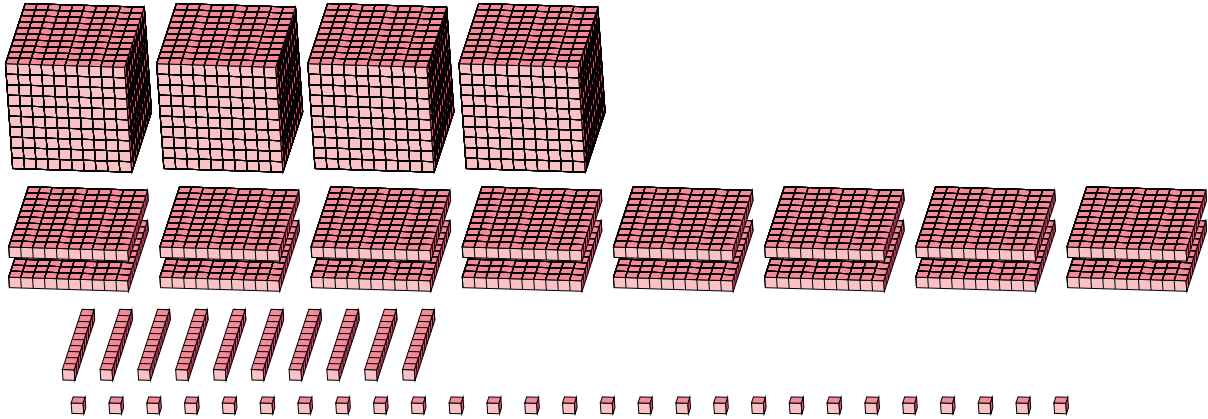
Regrouping Base Ten Blocks (J) Answers

Name: _____

Date: _____

What number is shown in each group of base ten blocks?

1.



Expanded Form

Standard Form

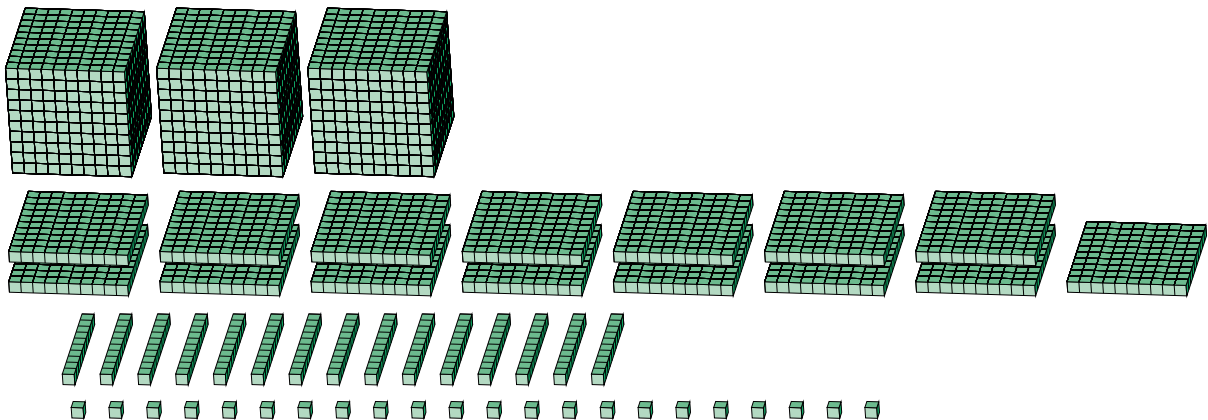
$$(4 \times 1000) + (16 \times 100) + (10 \times 10) + (27 \times 1)$$

$$(5 \times 1000) + (7 \times 100) + (2 \times 10) + (7 \times 1)$$

$$5000 + 700 + 20 + 7$$

5727

2.



Expanded Form

Standard Form

$$(3 \times 1000) + (15 \times 100) + (15 \times 10) + (22 \times 1)$$

$$(4 \times 1000) + (6 \times 100) + (7 \times 10) + (2 \times 1)$$

$$4000 + 600 + 70 + 2$$

4672