

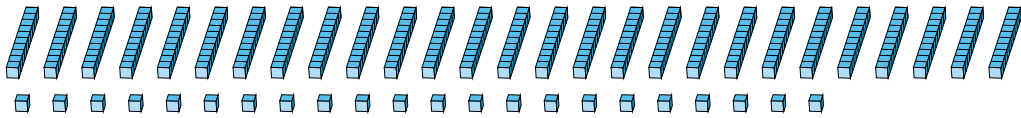
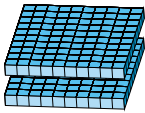
# Regrouping Base Ten Blocks (A)

Name: \_\_\_\_\_

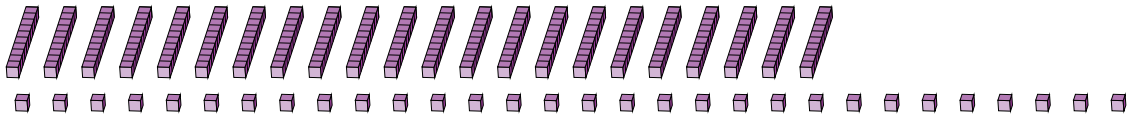
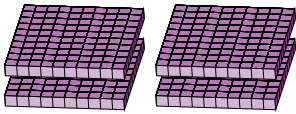
Date: \_\_\_\_\_

What number is shown in each group of base ten blocks?

1.



2.



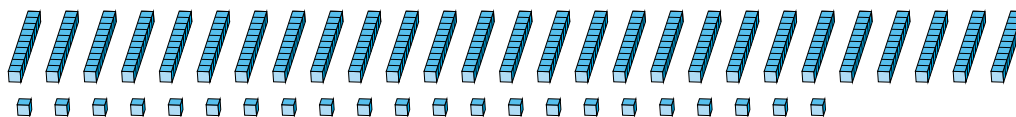
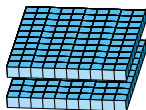
# Regrouping Base Ten Blocks (A) Answers

Name: \_\_\_\_\_

Date: \_\_\_\_\_

What number is shown in each group of base ten blocks?

1.



2.

