

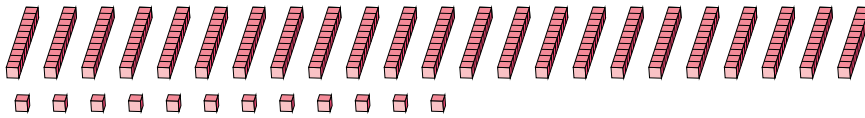
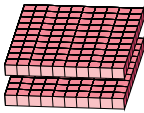
# Regrouping Base Ten Blocks (C)

Name: \_\_\_\_\_

Date: \_\_\_\_\_

What number is shown in each group of base ten blocks?

1.



hundreds

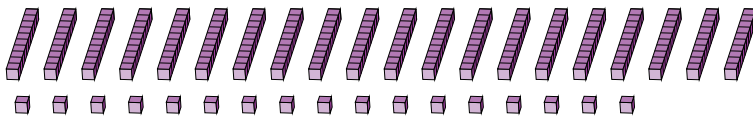
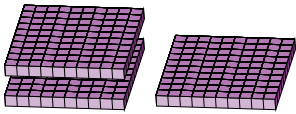
tens

ones



<input type="text"/>	<input type="text"/>	<input type="text"/>
----------------------	----------------------	----------------------

2.



hundreds

tens

ones



<input type="text"/>	<input type="text"/>	<input type="text"/>
----------------------	----------------------	----------------------

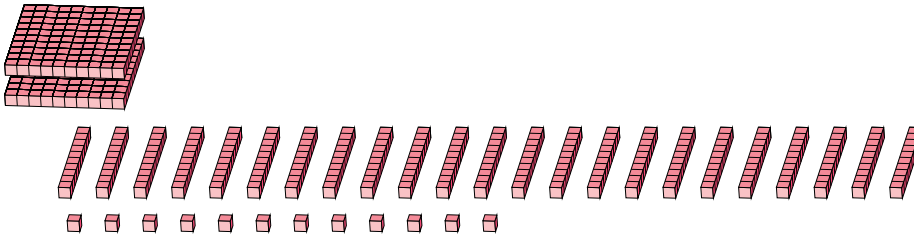
# Regrouping Base Ten Blocks (C) Answers

Name: \_\_\_\_\_

Date: \_\_\_\_\_

What number is shown in each group of base ten blocks?

1.



2.

