

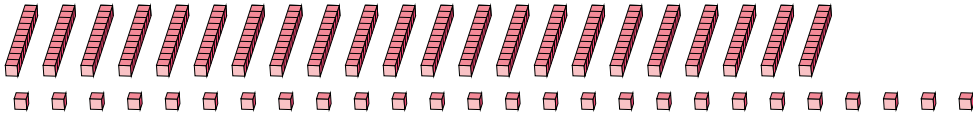
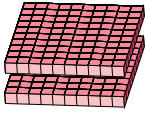
Regrouping Base Ten Blocks (D)

Name: _____

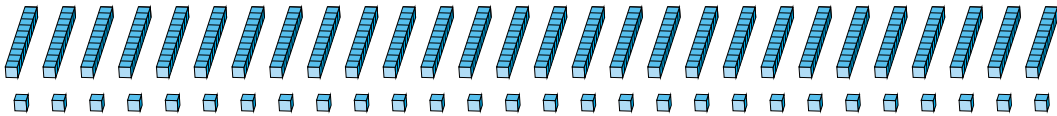
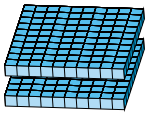
Date: _____

What number is shown in each group of base ten blocks?

1.



2.



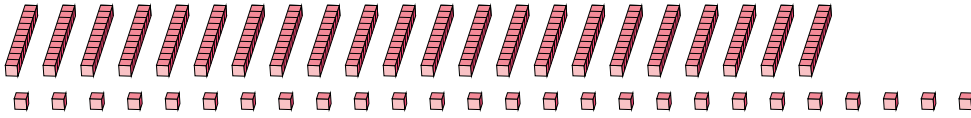
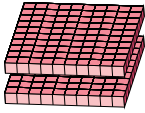
Regrouping Base Ten Blocks (D) Answers

Name: _____

Date: _____

What number is shown in each group of base ten blocks?

1.



2.

