

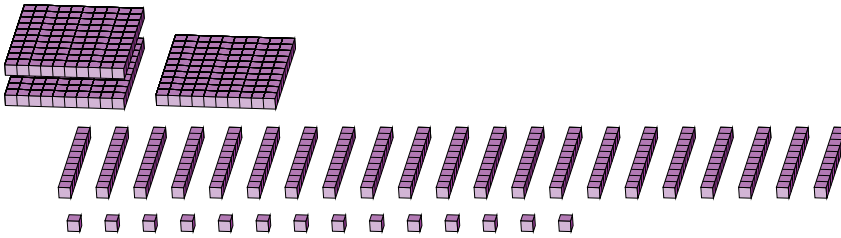
# Regrouping Base Ten Blocks (G)

Name: \_\_\_\_\_

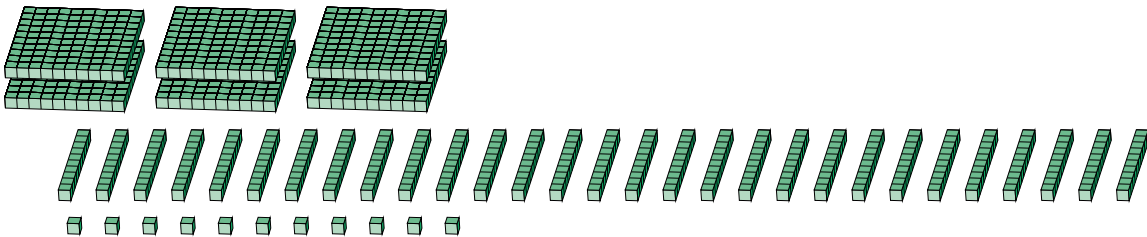
Date: \_\_\_\_\_

What number is shown in each group of base ten blocks?

1.



2.



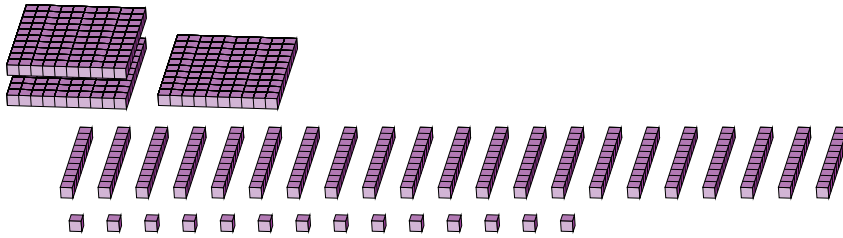
# Regrouping Base Ten Blocks (G) Answers

Name: \_\_\_\_\_

Date: \_\_\_\_\_

What number is shown in each group of base ten blocks?

1.



2.

