

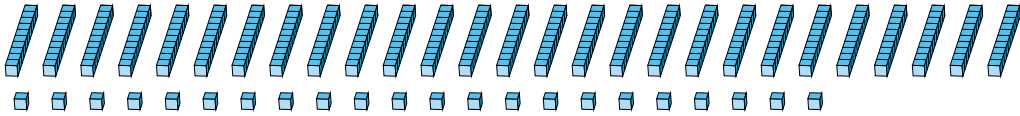
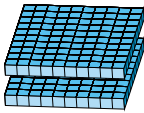
Regrouping Base Ten Blocks (A)

Name: _____

Date: _____

What number is shown in each group of base ten blocks?

1.



hundreds

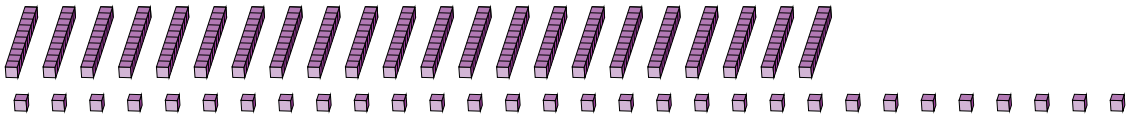
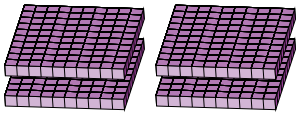
tens

ones



<input type="text"/>	<input type="text"/>	<input type="text"/>
----------------------	----------------------	----------------------

2.



hundreds

tens

ones



<input type="text"/>	<input type="text"/>	<input type="text"/>
----------------------	----------------------	----------------------

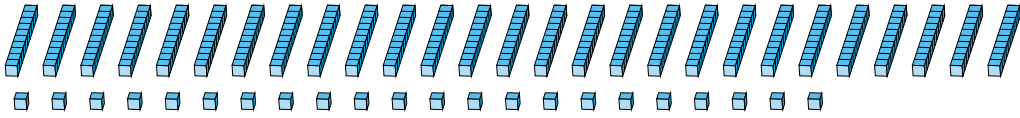
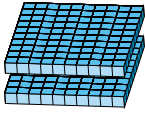
Regrouping Base Ten Blocks (A) Answers

Name: _____

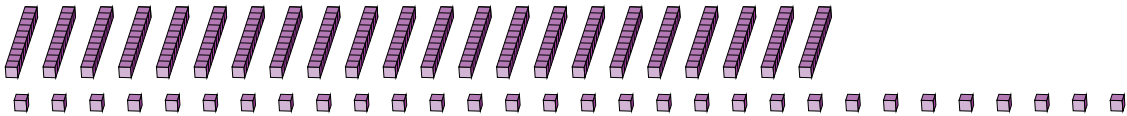
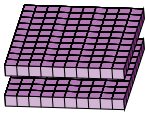
Date: _____

What number is shown in each group of base ten blocks?

1.



2.



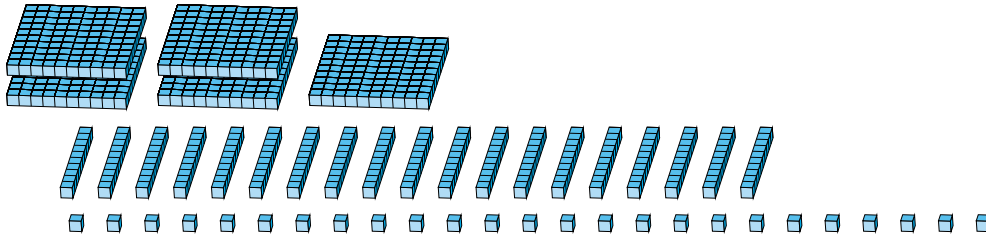
Regrouping Base Ten Blocks (B)

Name: _____

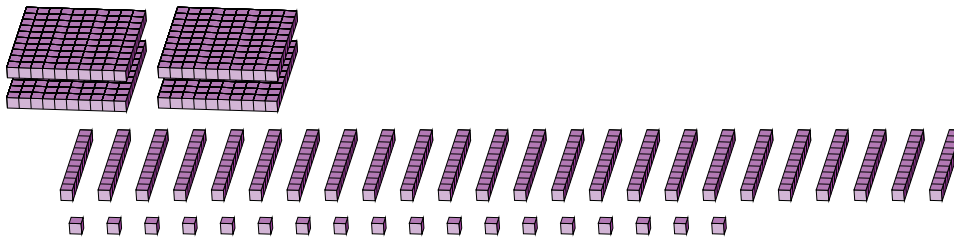
Date: _____

What number is shown in each group of base ten blocks?

1.



2.



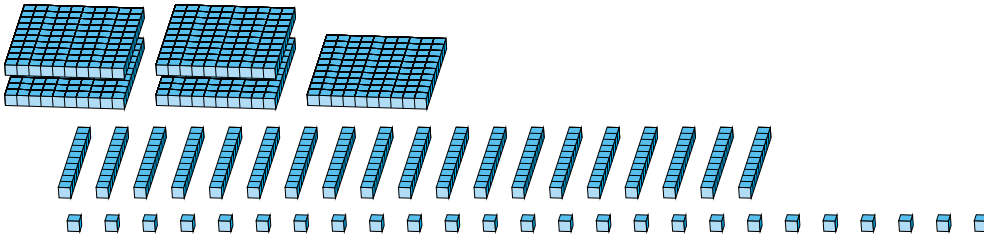
Regrouping Base Ten Blocks (B) Answers

Name: _____

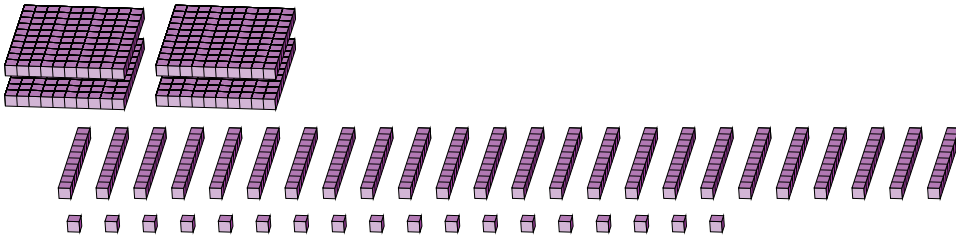
Date: _____

What number is shown in each group of base ten blocks?

1.



2.



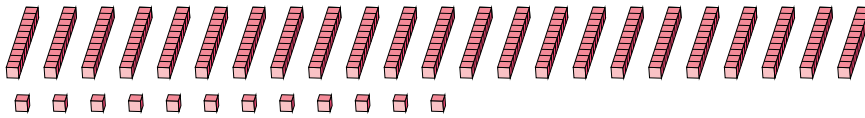
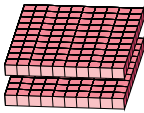
Regrouping Base Ten Blocks (C)

Name: _____

Date: _____

What number is shown in each group of base ten blocks?

1.



hundreds

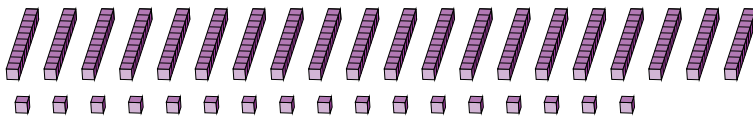
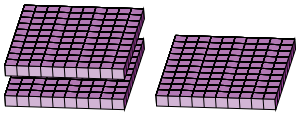
tens

ones



<input type="text"/>	<input type="text"/>	<input type="text"/>
----------------------	----------------------	----------------------

2.



hundreds

tens

ones



<input type="text"/>	<input type="text"/>	<input type="text"/>
----------------------	----------------------	----------------------

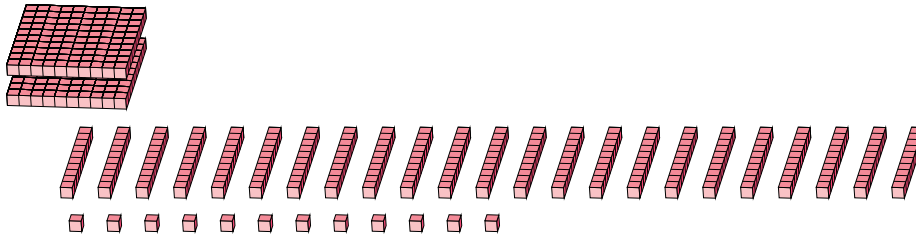
Regrouping Base Ten Blocks (C) Answers

Name: _____

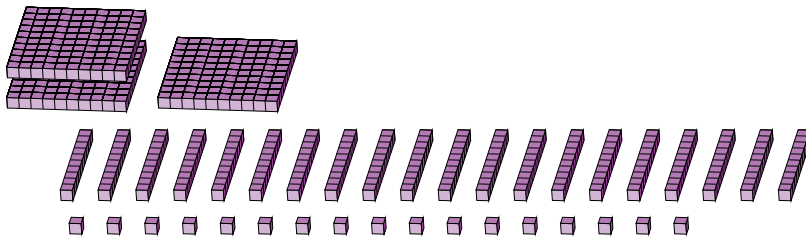
Date: _____

What number is shown in each group of base ten blocks?

1.



2.



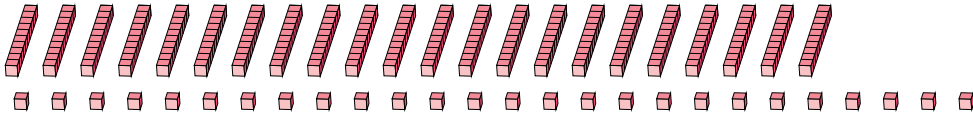
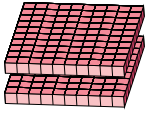
Regrouping Base Ten Blocks (D)

Name: _____

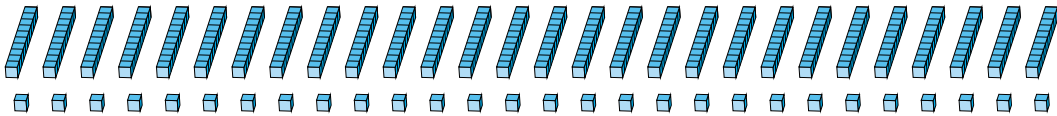
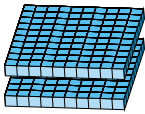
Date: _____

What number is shown in each group of base ten blocks?

1.



2.



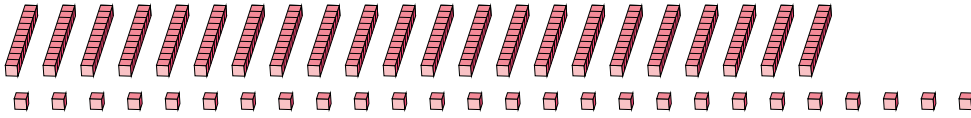
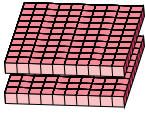
Regrouping Base Ten Blocks (D) Answers

Name: _____

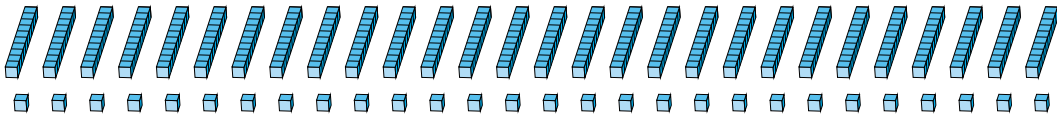
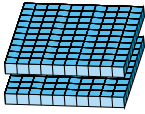
Date: _____

What number is shown in each group of base ten blocks?

1.



2.



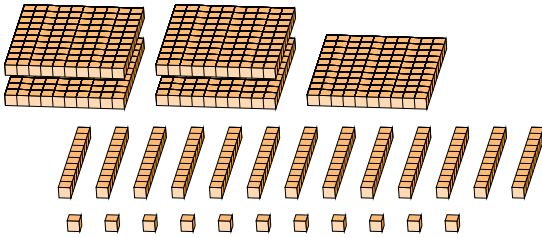
Regrouping Base Ten Blocks (E)

Name: _____

Date: _____

What number is shown in each group of base ten blocks?

1.




hundreds tens ones

→
regroup

<input type="text"/>	<input type="text"/>	<input type="text"/>
----------------------	----------------------	----------------------

2.



hundreds tens ones

→
regroup

<input type="text"/>	<input type="text"/>	<input type="text"/>
----------------------	----------------------	----------------------

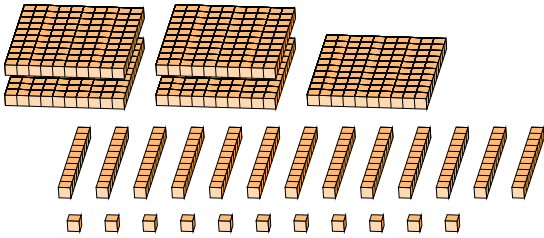
Regrouping Base Ten Blocks (E) Answers

Name: _____

Date: _____

What number is shown in each group of base ten blocks?

1.




5	13	11
hundreds	tens	ones

→
 regroup

6	4	1
---	---	---

2.



5	11	26
hundreds	tens	ones

→
 regroup

6	3	6
---	---	---

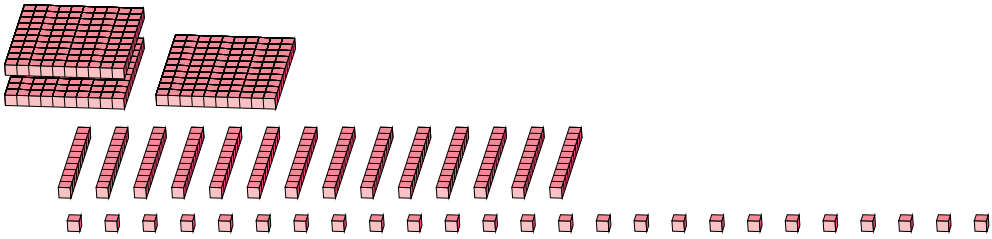
Regrouping Base Ten Blocks (F)

Name: _____

Date: _____

What number is shown in each group of base ten blocks?

1.



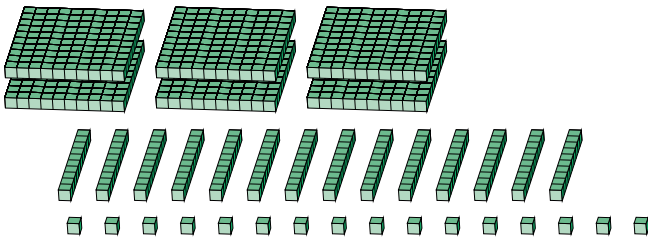
2 hundreds flats, 1 tens rod, and 14 ones units.

hundreds	tens	ones

regroup

--	--	--

2.



3 hundreds flats, 14 tens rods, and 14 ones units.

hundreds	tens	ones

regroup

--	--	--

Regrouping Base Ten Blocks (F) Answers

Name: _____

Date: _____

What number is shown in each group of base ten blocks?

1.

3
hundreds

14
tens

25
ones

→

4	6	5
---	---	---

regroup

2.

6
hundreds

14
tens

16
ones

→

7	5	6
---	---	---

regroup

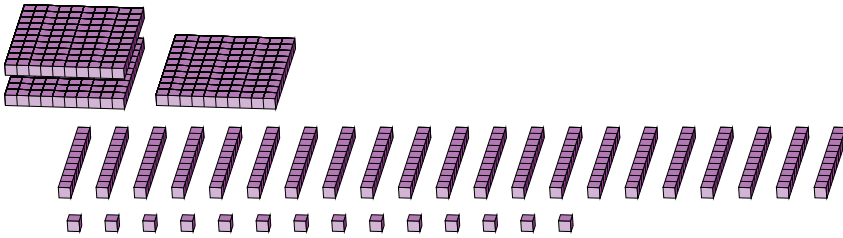
Regrouping Base Ten Blocks (G)

Name: _____

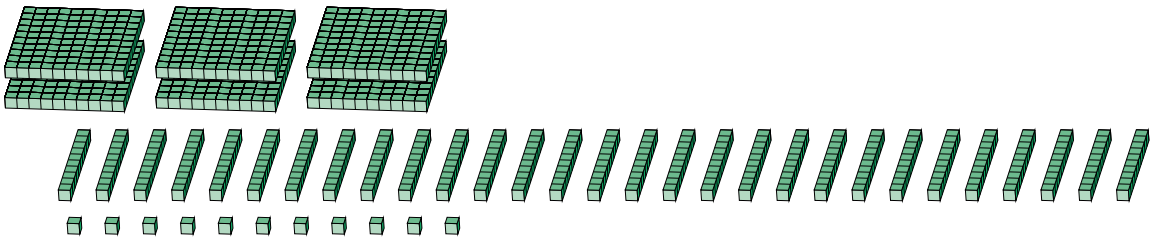
Date: _____

What number is shown in each group of base ten blocks?

1.



2.



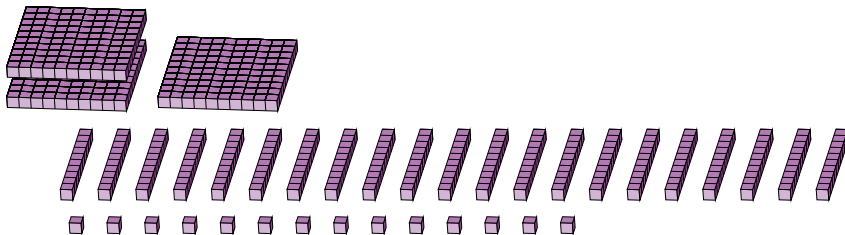
Regrouping Base Ten Blocks (G) Answers

Name: _____


Date: _____

What number is shown in each group of base ten blocks?

1.



2.



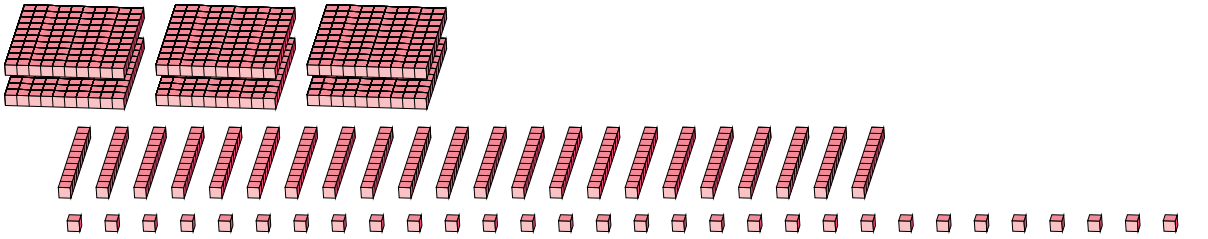
Regrouping Base Ten Blocks (H)

Name: _____

Date: _____

What number is shown in each group of base ten blocks?

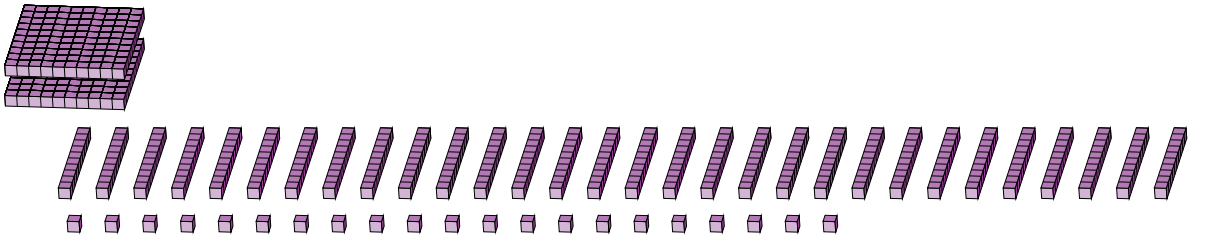
1.



Three flats (100s), four tens rods (10s), and five ones units (1s).

<input type="text"/>	<input type="text"/>	<input type="text"/>	→ regroup	<input type="text"/>	<input type="text"/>	<input type="text"/>
hundreds	tens	ones				

2.



One flat (100s), four tens rods (10s), and five ones units (1s).

<input type="text"/>	<input type="text"/>	<input type="text"/>	→ regroup	<input type="text"/>	<input type="text"/>	<input type="text"/>
hundreds	tens	ones				

Regrouping Base Ten Blocks (H) Answers

Name: _____

Date: _____

What number is shown in each group of base ten blocks?

1.

6	22	30	→	8	5	0
hundreds	tens	ones	regroup			

2.

2	30	21	→	5	2	1
hundreds	tens	ones	regroup			

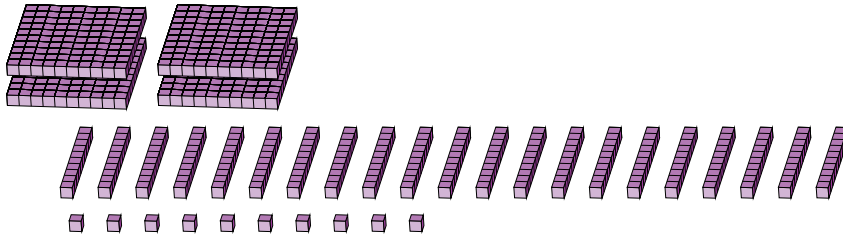
Regrouping Base Ten Blocks (I)

Name: _____

Date: _____

What number is shown in each group of base ten blocks?

1.



hundreds

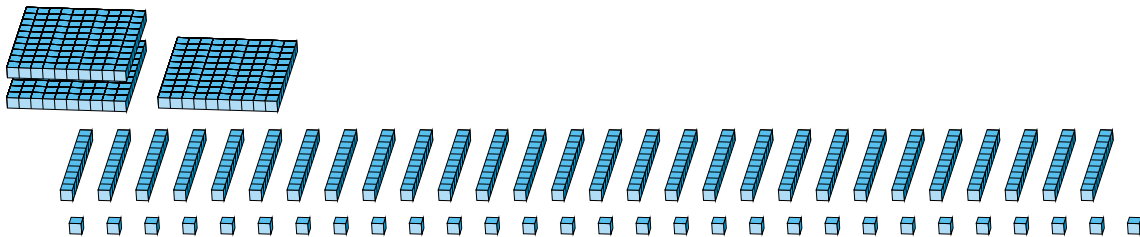
tens

ones

→
regroup

<input type="text"/>	<input type="text"/>	<input type="text"/>
----------------------	----------------------	----------------------

2.



hundreds

tens

ones

→
regroup

<input type="text"/>	<input type="text"/>	<input type="text"/>
----------------------	----------------------	----------------------

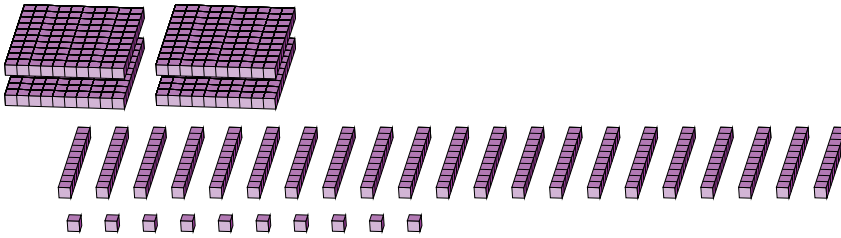
Regrouping Base Ten Blocks (I) Answers

Name: _____

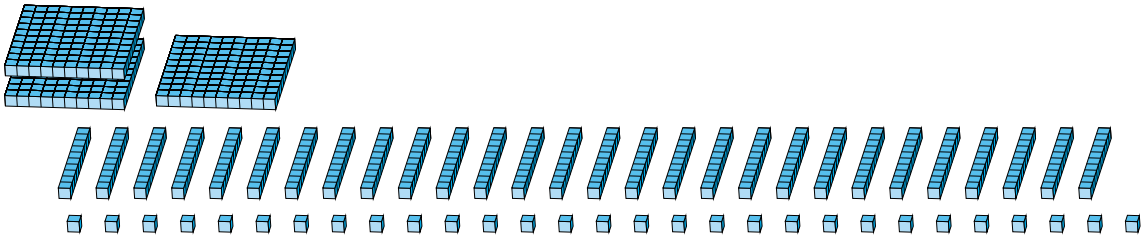
Date: _____

What number is shown in each group of base ten blocks?

1.



2.



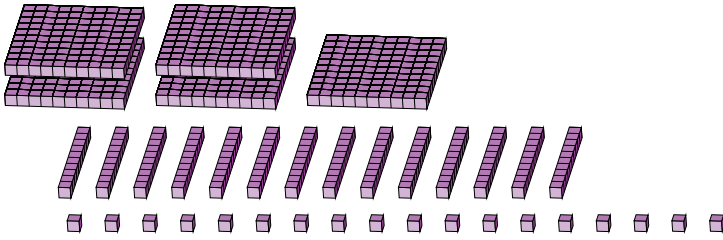
Regrouping Base Ten Blocks (J)

Name: _____

Date: _____

What number is shown in each group of base ten blocks?

1.



hundreds

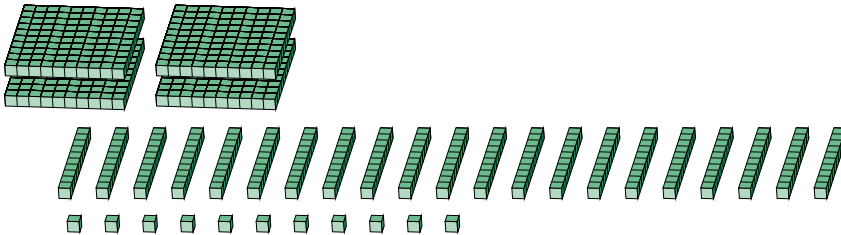
tens

ones

→
regroup

<input type="text"/>	<input type="text"/>	<input type="text"/>
----------------------	----------------------	----------------------

2.



hundreds

tens

ones

→
regroup

<input type="text"/>	<input type="text"/>	<input type="text"/>
----------------------	----------------------	----------------------

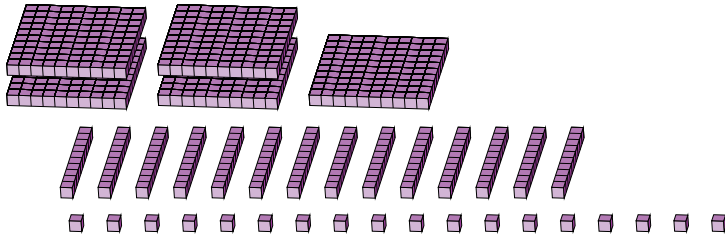
Regrouping Base Ten Blocks (J) Answers

Name: _____

Date: _____

What number is shown in each group of base ten blocks?

1.

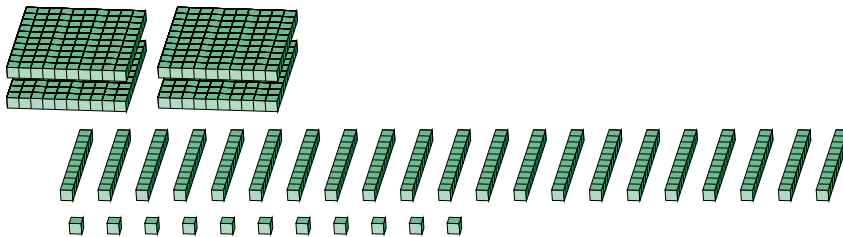


5	14	18
hundreds	tens	ones

→
 regroup

6	5	8
---	---	---

2.



4	21	11
hundreds	tens	ones

→
 regroup

6	2	1
---	---	---