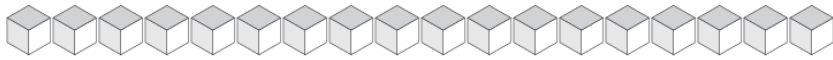


Trading Units for Rods (A)

How many units can you trade for rods and how many will be left?



Rods	Units



Rods	Units



Rods	Units



Rods	Units



Rods	Units

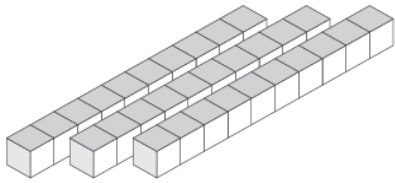


Rods	Units

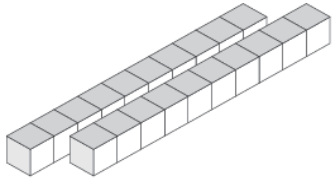


Trading Units for Rods (A) Answers

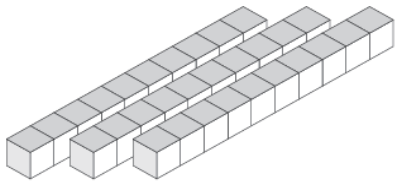
How many units can you trade for rods and how many will be left?



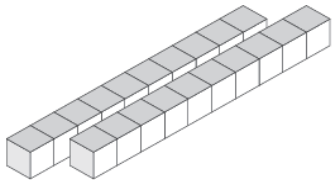
Rods	Units
3	3



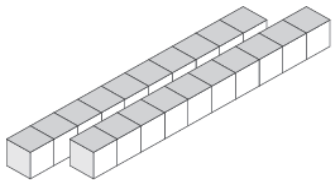
Rods	Units
2	9



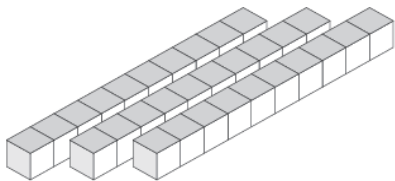
Rods	Units
3	5



Rods	Units
2	2



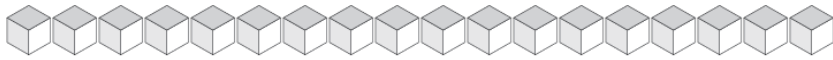
Rods	Units
2	3



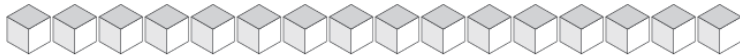
Rods	Units
3	8

Trading Units for Rods (B)

How many units can you trade for rods and how many will be left?



Rods	Units



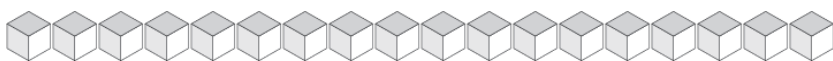
Rods	Units



Rods	Units



Rods	Units



Rods	Units

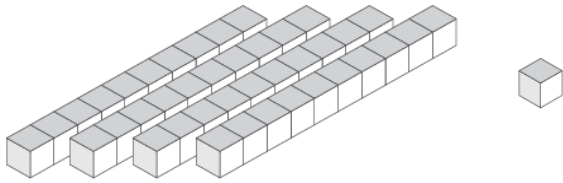


Rods	Units

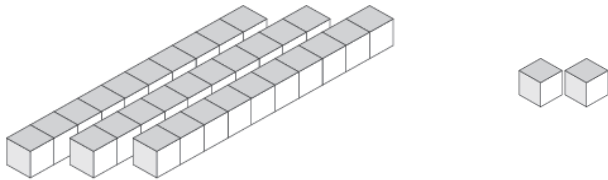


Trading Units for Rods (B) Answers

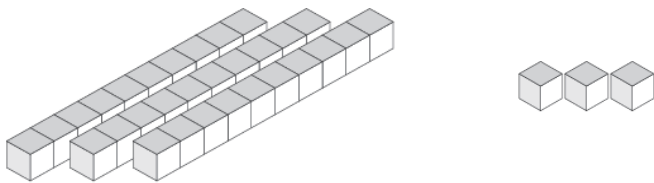
How many units can you trade for rods and how many will be left?



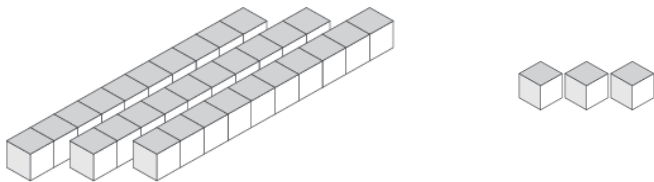
Rods	Units
4	1



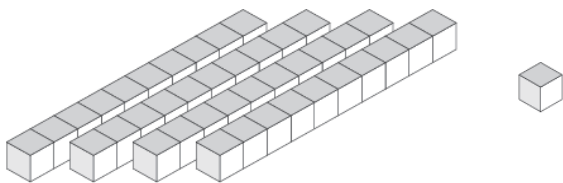
Rods	Units
3	2



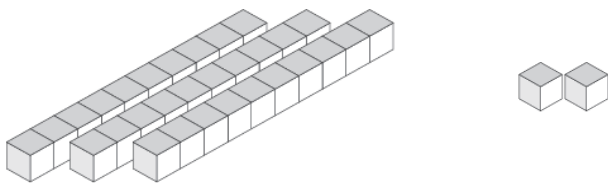
Rods	Units
3	3



Rods	Units
3	3



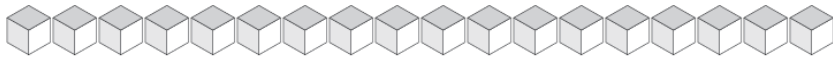
Rods	Units
4	1



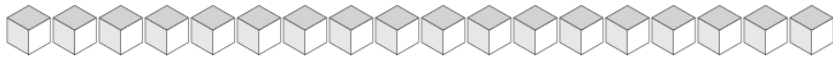
Rods	Units
3	2

Trading Units for Rods (C)

How many units can you trade for rods and how many will be left?



Rods	Units



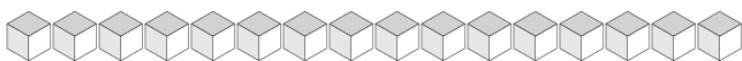
Rods	Units



Rods	Units



Rods	Units



Rods	Units

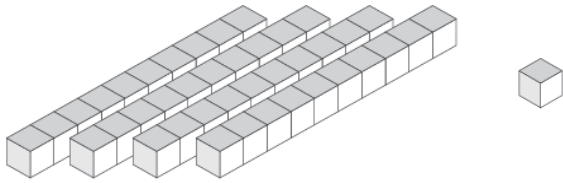


Rods	Units

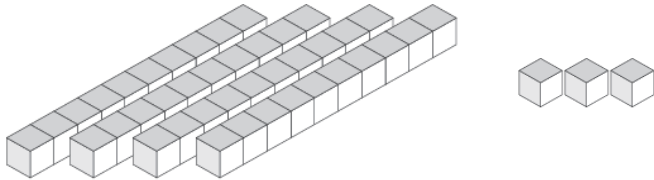


Trading Units for Rods (C) Answers

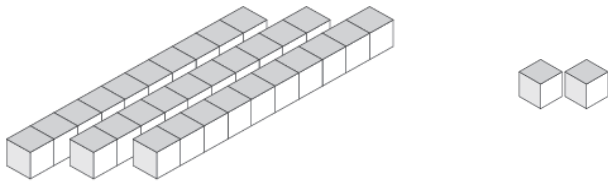
How many units can you trade for rods and how many will be left?



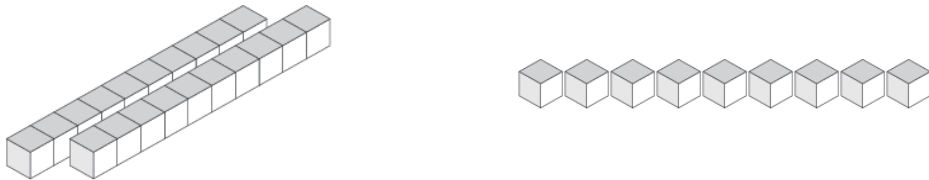
Rods	Units
4	1



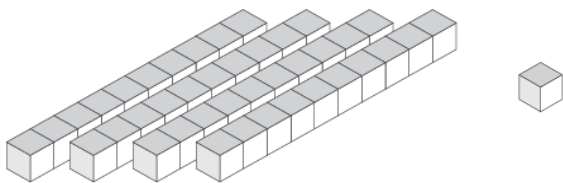
Rods	Units
4	3



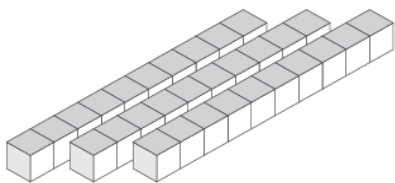
Rods	Units
3	2



Rods	Units
2	9



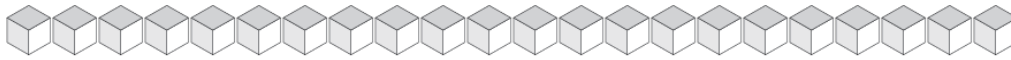
Rods	Units
4	1



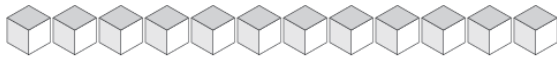
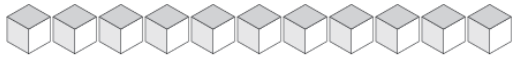
Rods	Units
3	0

Trading Units for Rods (D)

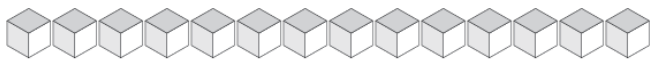
How many units can you trade for rods and how many will be left?



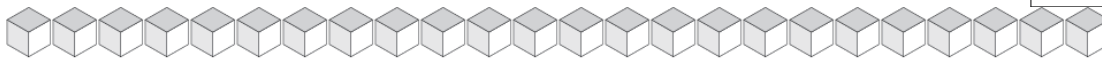
Rods	Units



Rods	Units



Rods	Units



Rods	Units



Rods	Units

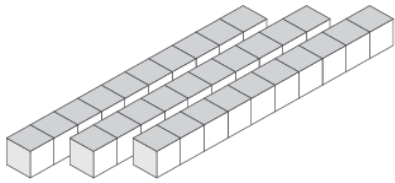


Rods	Units

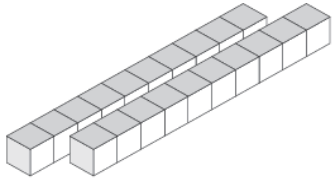


Trading Units for Rods (D) Answers

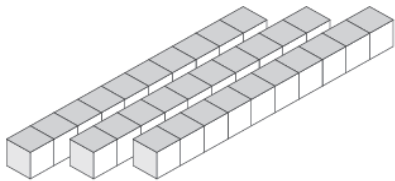
How many units can you trade for rods and how many will be left?



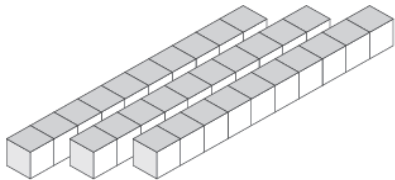
Rods	Units
3	3



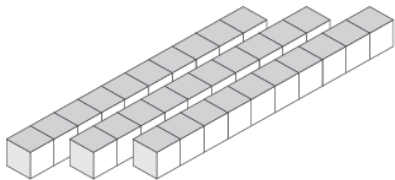
Rods	Units
2	6



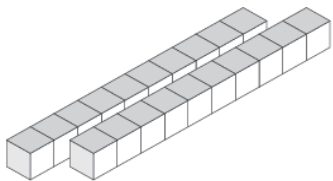
Rods	Units
3	7



Rods	Units
3	4



Rods	Units
3	0



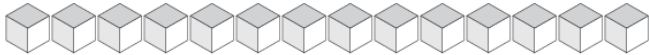
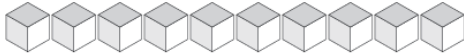
Rods	Units
2	7

Trading Units for Rods (E)

How many units can you trade for rods and how many will be left?



Rods	Units



Rods	Units



Rods	Units



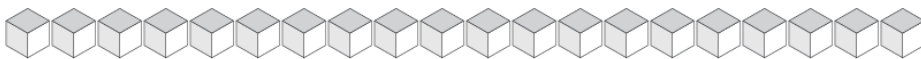
Rods	Units



Rods	Units

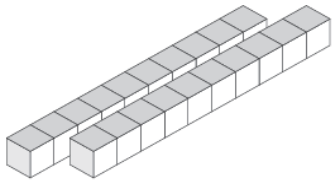


Rods	Units

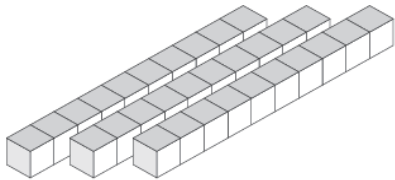


Trading Units for Rods (E) Answers

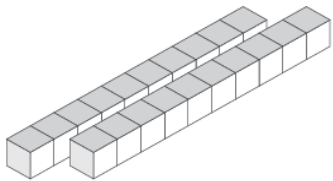
How many units can you trade for rods and how many will be left?



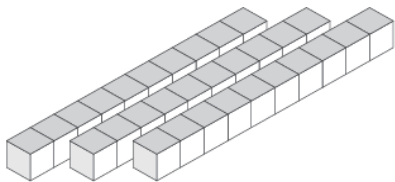
Rods	Units
2	9



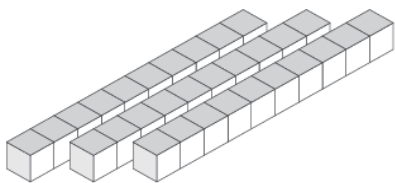
Rods	Units
3	5



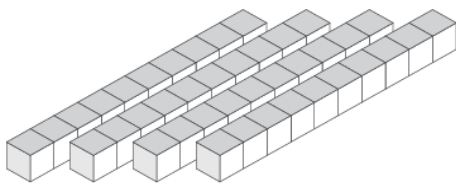
Rods	Units
2	8



Rods	Units
3	3



Rods	Units
3	1



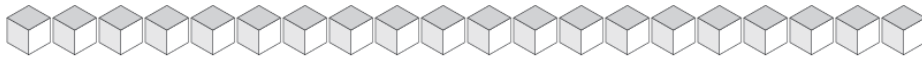
Rods	Units
4	1

Trading Units for Rods (F)

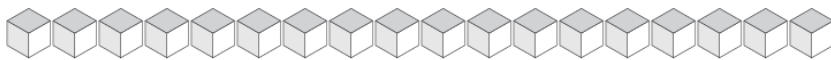
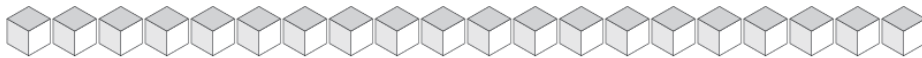
How many units can you trade for rods and how many will be left?



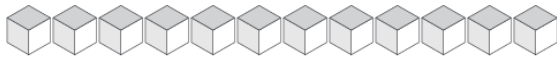
Rods	Units



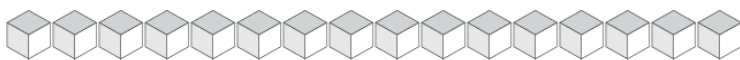
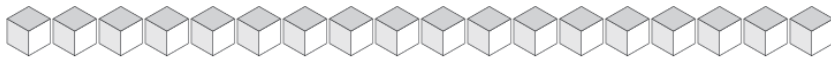
Rods	Units



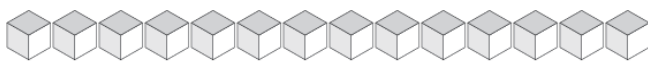
Rods	Units



Rods	Units



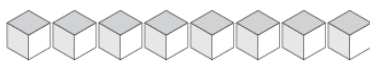
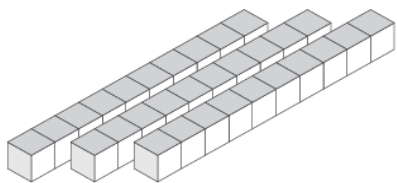
Rods	Units



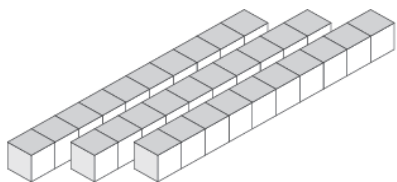
Rods	Units

Trading Units for Rods (F) Answers

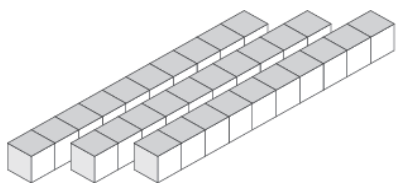
How many units can you trade for rods and how many will be left?



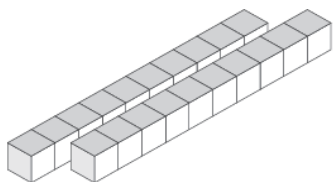
Rods	Units
3	8



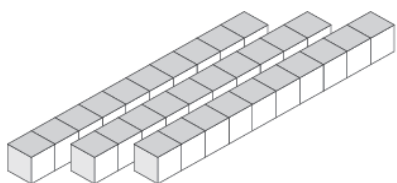
Rods	Units
3	1



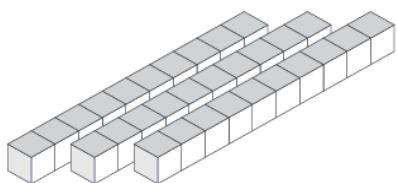
Rods	Units
3	8



Rods	Units
2	7



Rods	Units
3	4



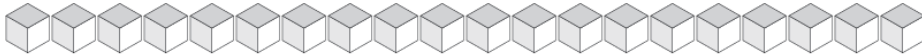
Rods	Units
3	5

Trading Units for Rods (G)

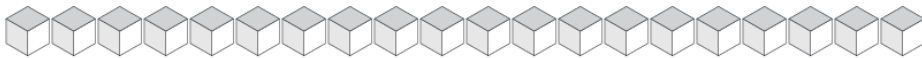
How many units can you trade for rods and how many will be left?



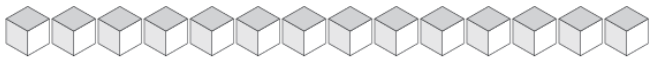
Rods	Units



Rods	Units



Rods	Units



Rods	Units



Rods	Units

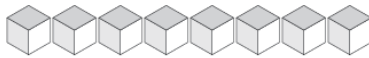
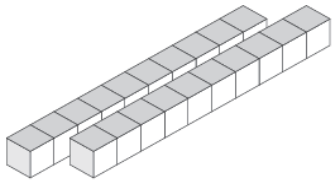


Rods	Units

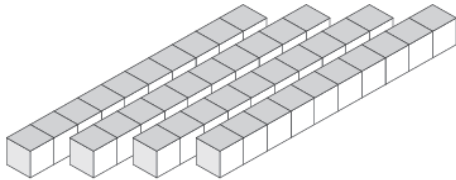


Trading Units for Rods (G) Answers

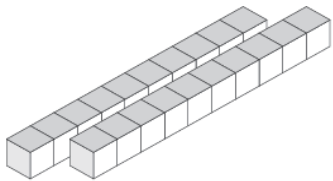
How many units can you trade for rods and how many will be left?



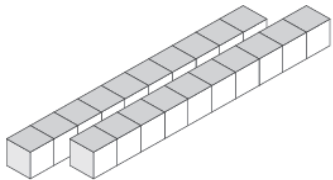
Rods	Units
2	8



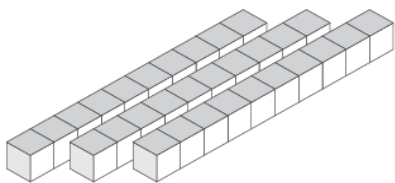
Rods	Units
4	0



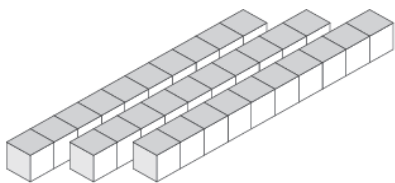
Rods	Units
2	9



Rods	Units
2	7



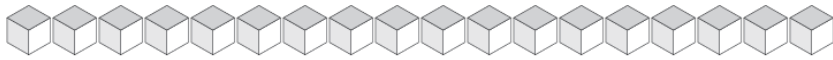
Rods	Units
3	4



Rods	Units
3	7

Trading Units for Rods (H)

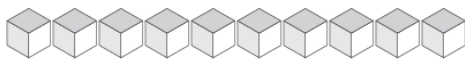
How many units can you trade for rods and how many will be left?



Rods	Units



Rods	Units



Rods	Units



Rods	Units



Rods	Units

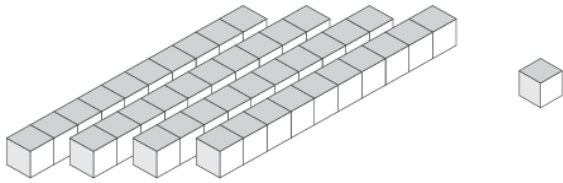


Rods	Units

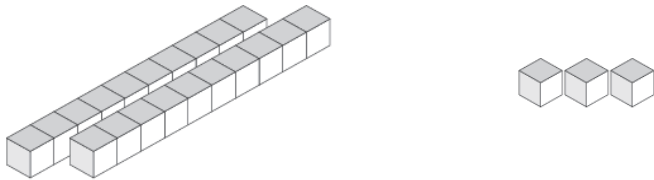


Trading Units for Rods (H) Answers

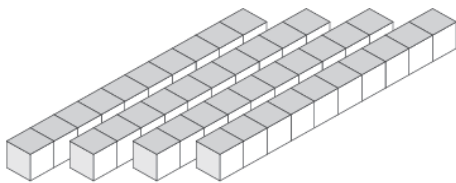
How many units can you trade for rods and how many will be left?



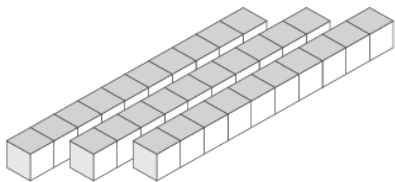
Rods	Units
4	1



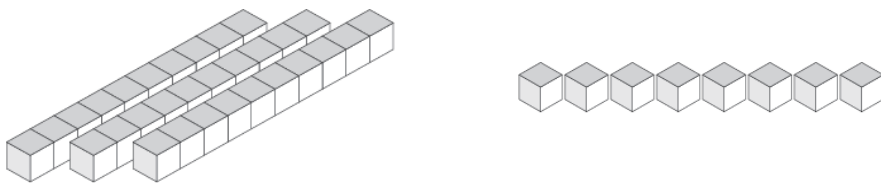
Rods	Units
2	3



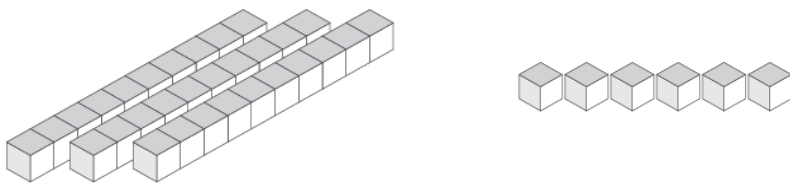
Rods	Units
4	0



Rods	Units
3	0



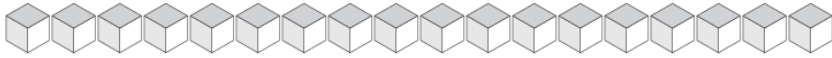
Rods	Units
3	8



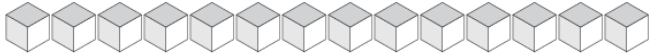
Rods	Units
3	6

Trading Units for Rods (I)

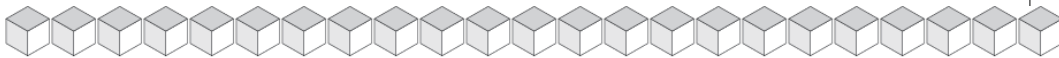
How many units can you trade for rods and how many will be left?



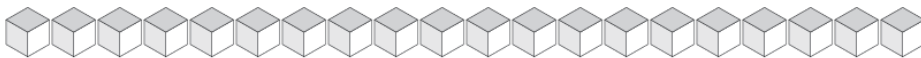
Rods	Units



Rods	Units



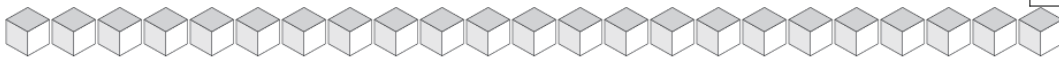
Rods	Units



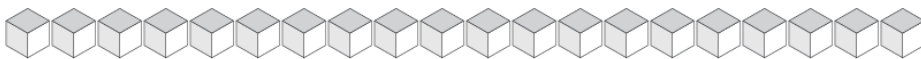
Rods	Units



Rods	Units

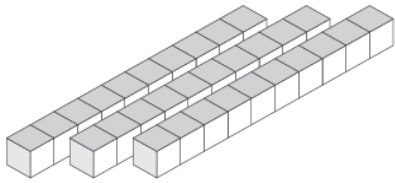


Rods	Units

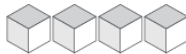
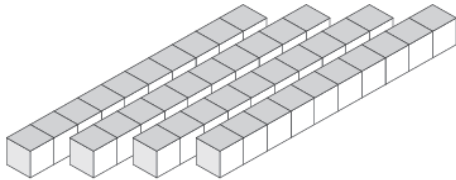


Trading Units for Rods (I) Answers

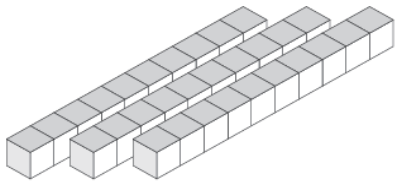
How many units can you trade for rods and how many will be left?



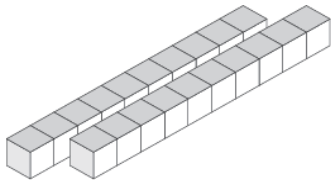
Rods	Units
3	2



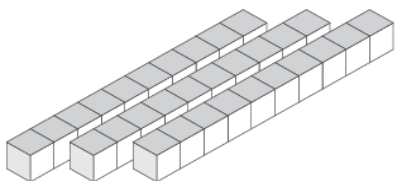
Rods	Units
4	4



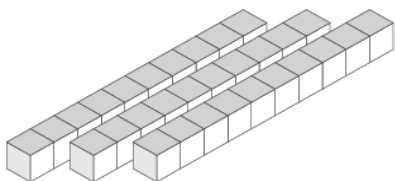
Rods	Units
3	0



Rods	Units
2	1



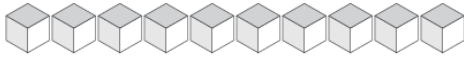
Rods	Units
3	8



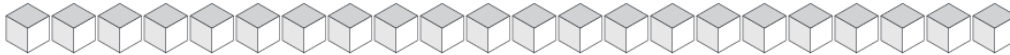
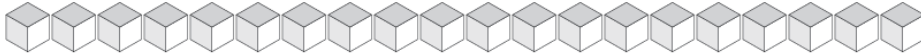
Rods	Units
3	6

Trading Units for Rods (J)

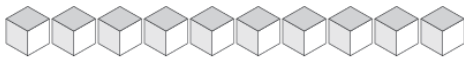
How many units can you trade for rods and how many will be left?



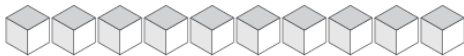
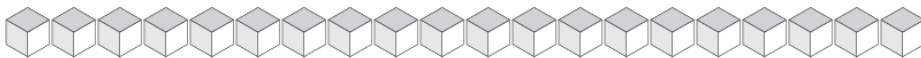
Rods	Units



Rods	Units



Rods	Units



Rods	Units



Rods	Units

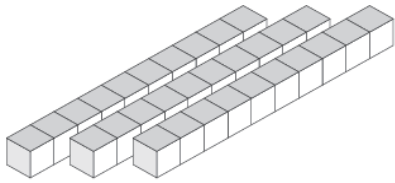


Rods	Units

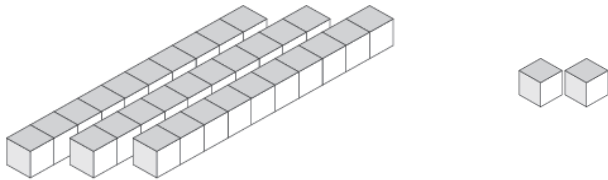


Trading Units for Rods (J) Answers

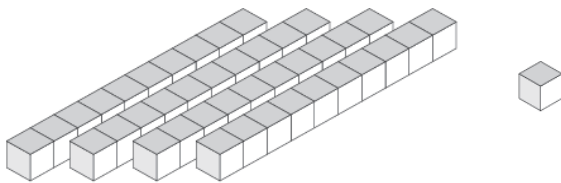
How many units can you trade for rods and how many will be left?



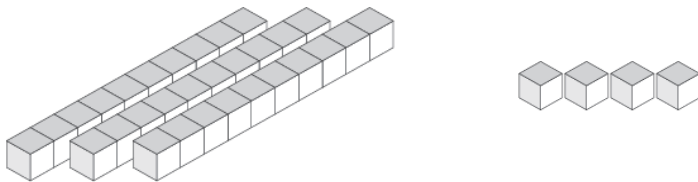
Rods	Units
3	0



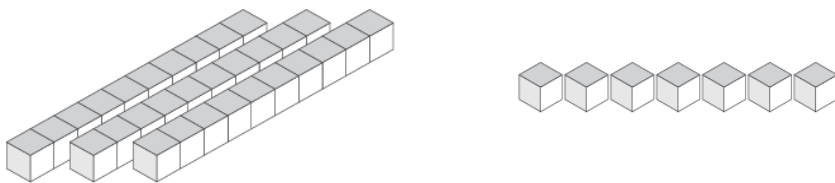
Rods	Units
3	2



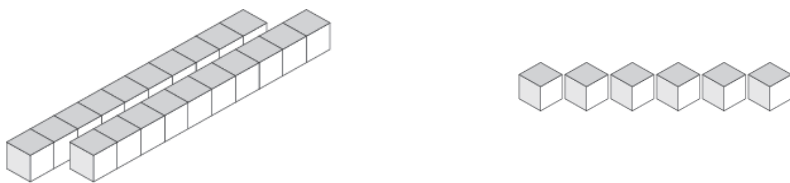
Rods	Units
4	1



Rods	Units
3	4



Rods	Units
3	7



Rods	Units
2	6