


Counting Christmas Objects (I)

Name: _____

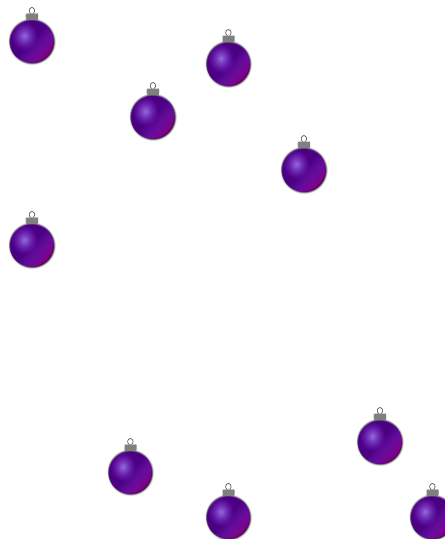
Date: _____

Count how many objects there are in each group.


1. There are _____ bows in the group below.



2. There are _____ baubles in the group below.



3. There are _____ presents in the group below.



4. There are _____ Christmas trees in the group below.




Counting Christmas Objects (I) Answers

Name: _____


Date: _____

Count how many objects there are in each group.


1. There are 10 bows in the group below.



2. There are 9 baubles in the group below.



3. There are 7 presents in the group below.



4. There are 5 Christmas trees in the group below.

