

Counting Christmas Objects (A)

Name: _____

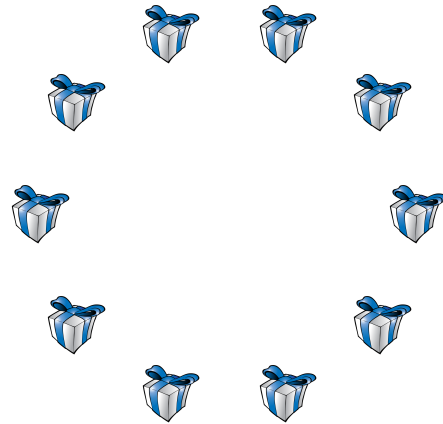
Date: _____

Count how many objects there are in each group.


1. There are _____ baubles in the group below.




2. There are _____ presents in the group below.



3. There are _____ Christmas trees in the group below.



4. There are _____ bows in the group below.



Counting Christmas Objects (A) Answers

Name: _____

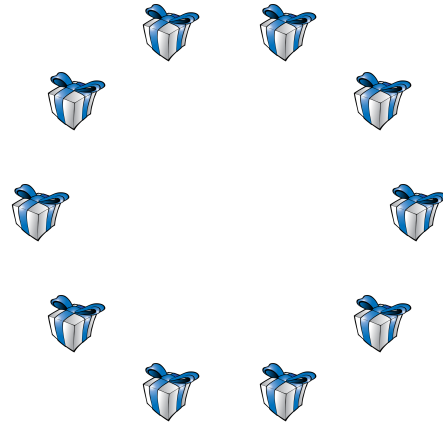
Date: _____

Count how many objects there are in each group.


1. There are 8 baubles in the group below.



2. There are 10 presents in the group below.



3. There are 8 Christmas trees in the group below.



4. There are 3 bows in the group below.



Counting Christmas Objects (B)

Name: _____


Date: _____

Count how many objects there are in each group.

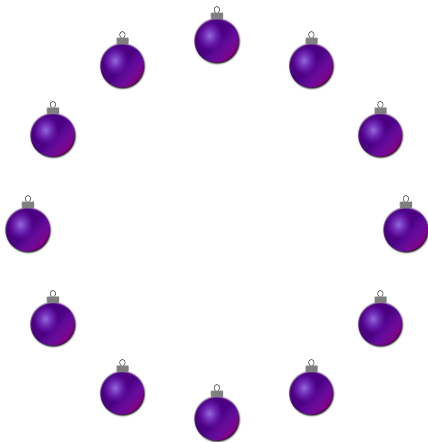
1. There are _____ presents in the group below.




2. There are _____ Christmas trees in the group below.



3. There are _____ baubles in the group below.



4. There are _____ bows in the group below.



Counting Christmas Objects (B) Answers

Name: _____


Date: _____

Count how many objects there are in each group.

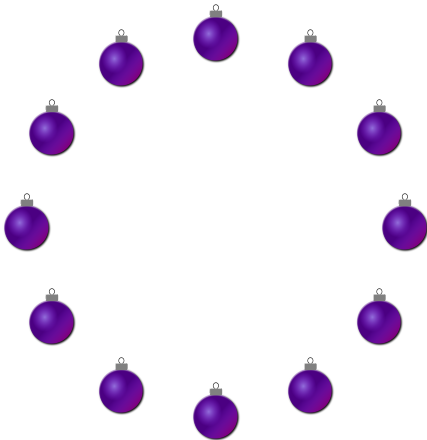
1. There are 4 presents in the group below.




2. There are 25 Christmas trees in the group below.



3. There are 12 baubles in the group below.



4. There are 9 bows in the group below.




Counting Christmas Objects (C)

Name: _____


Date: _____

Count how many objects there are in each group.

1. There are _____ baubles in the group below.




2. There are _____ Christmas trees in the group below.



3. There are _____ presents in the group below.



4. There are _____ bows in the group below.




Counting Christmas Objects (C) Answers

Name: _____


Date: _____

Count how many objects there are in each group.

1. There are 9 baubles in the group below.




2. There are 25 Christmas trees in the group below.



3. There are 5 presents in the group below.



4. There are 14 bows in the group below.




Counting Christmas Objects (D)

Name: _____


Date: _____

Count how many objects there are in each group.


1. There are _____ presents in the group below.




2. There are _____ Christmas trees in the group below.



3. There are _____ bows in the group below.



4. There are _____ baubles in the group below.




Counting Christmas Objects (D) Answers

Name: _____


Date: _____

Count how many objects there are in each group.


1. There are 9 presents in the group below.




2. There are 6 Christmas trees in the group below.



3. There are 4 bows in the group below.



4. There are 12 baubles in the group below.



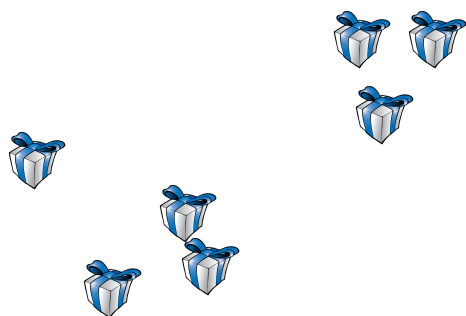
Counting Christmas Objects (E)

Name: _____


Date: _____

Count how many objects there are in each group.

1. There are _____ presents in the group below.



2. There are _____ bows in the group below.



3. There are _____ baubles in the group below.



4. There are _____ Christmas trees in the group below.




Counting Christmas Objects (E) Answers

Name: _____


Date: _____

Count how many objects there are in each group.

1. There are 7 presents in the group below.



2. There are 9 bows in the group below.



3. There are 10 baubles in the group below.



4. There are 7 Christmas trees in the group below.



Counting Christmas Objects (F)

Name: _____


Date: _____

Count how many objects there are in each group.

1. There are _____ Christmas trees in the group below.



2. There are _____ bows in the group below.



3. There are _____ presents in the group below.



4. There are _____ baubles in the group below.



Counting Christmas Objects (F) Answers

Name: _____


Date: _____

Count how many objects there are in each group.

1. There are 6 Christmas trees in the group below.



2. There are 7 bows in the group below.



3. There are 9 presents in the group below.



4. There are 3 baubles in the group below.



Counting Christmas Objects (6)

Name: _____


Date: _____

Count how many objects there are in each group.


1. There are _____ Christmas trees in the group below.



2. There are _____ bows in the group below.



3. There are _____ baubles in the group below.



4. There are _____ presents in the group below.



Counting Christmas Objects (G) Answers

Name: _____


Date: _____

Count how many objects there are in each group.


1. There are 6 Christmas trees in the group below.



2. There are 8 bows in the group below.



3. There are 9 baubles in the group below.



4. There are 7 presents in the group below.



Counting Christmas Objects (H)

Name: _____


Date: _____

Count how many objects there are in each group.


1. There are _____ Christmas trees in the group below.




2. There are _____ baubles in the group below.



3. There are _____ presents in the group below.



4. There are _____ bows in the group below.



Counting Christmas Objects (H) Answers

Name: _____


Date: _____

Count how many objects there are in each group.


1. There are 3 Christmas trees in the group below.




2. There are 15 baubles in the group below.



3. There are 9 presents in the group below.



4. There are 6 bows in the group below.




Counting Christmas Objects (I)

Name: _____

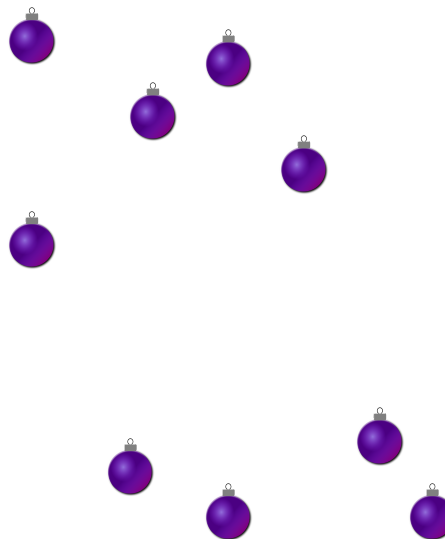
Date: _____

Count how many objects there are in each group.


1. There are _____ bows in the group below.



2. There are _____ baubles in the group below.



3. There are _____ presents in the group below.



4. There are _____ Christmas trees in the group below.




Counting Christmas Objects (I) Answers

Name: _____


Date: _____

Count how many objects there are in each group.


1. There are 10 bows in the group below.



2. There are 9 baubles in the group below.



3. There are 7 presents in the group below.



4. There are 5 Christmas trees in the group below.




Counting Christmas Objects (J)

Name: _____


Date: _____

Count how many objects there are in each group.


1. There are _____ Christmas trees in the group below.



2. There are _____ baubles in the group below.



3. There are _____ bows in the group below.



4. There are _____ presents in the group below.




Counting Christmas Objects (J) Answers

Name: _____

Date: _____

Count how many objects there are in each group.


1. There are 8 Christmas trees in the group below.



2. There are 10 baubles in the group below.



3. There are 13 bows in the group below.



4. There are 7 presents in the group below.

