


# Counting Christmas Objects (B)

Name: \_\_\_\_\_


Date: \_\_\_\_\_

Count how many objects there are in each group.


1. There are \_\_\_\_\_ presents in the group below.



2. There are \_\_\_\_\_ Christmas trees in the group below.



3. There are \_\_\_\_\_ bows in the group below.



4. There are \_\_\_\_\_ baubles in the group below.

