

# Counting Christmas Objects (D)

Name: \_\_\_\_\_


Date: \_\_\_\_\_

Count how many objects there are in each group.


1. There are \_\_\_\_\_ Christmas trees in the group below.



2. There are \_\_\_\_\_ presents in the group below.



3. There are \_\_\_\_\_ baubles in the group below.



4. There are \_\_\_\_\_ bows in the group below.



# Counting Christmas Objects (D) Answers

Name: \_\_\_\_\_


Date: \_\_\_\_\_

Count how many objects there are in each group.


1. There are 5 Christmas trees in the group below.



2. There are 12 presents in the group below.



3. There are 36 baubles in the group below.



4. There are 30 bows in the group below.

